



Year 2 Homework

Find a Third

1. Match each whole number to its third.



VF
HW/Ext

2. The children went shopping. They got 3 packets of stickers and spent 18p in total.



Sam

Each pack of stickers cost 6p.



Kim

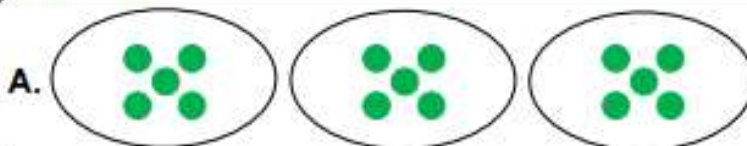
Each pack of stickers cost 7p.

Who is correct?



VF
HW/Ext

3. Ben has used the sorting hoops to find $\frac{1}{3}$ of different numbers. Complete the statements.



$$\frac{1}{3} \text{ of } 15 = \square$$



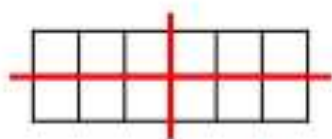
$$\frac{1}{3} \text{ of } 21 = \square$$



RFS
HW/Ext

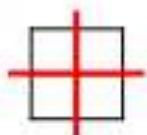
Find a Quarter

1. Match the fractions to the correct answer. Shade $\frac{1}{4}$ of the shapes to help you.



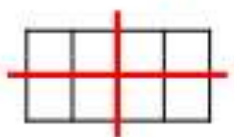
$\frac{1}{4}$ of 12 is

1



$\frac{1}{4}$ of 4 is

2



$\frac{1}{4}$ of 8 is

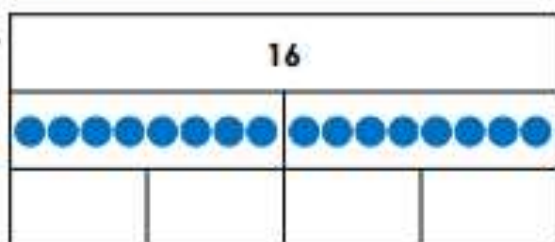
3



VF
HW/Est

2. Complete the bar models and the corresponding statements.

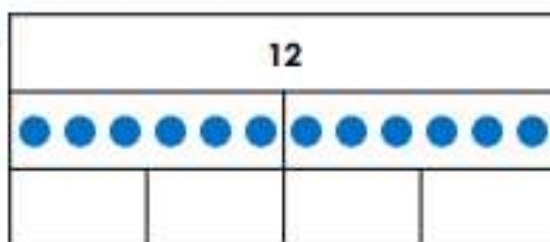
A.



$\frac{1}{2}$ of 16 is

$\frac{1}{4}$ of 16 is

B.



$\frac{1}{2}$ of 12 is

$\frac{1}{4}$ of 12 is



VF
HW/Est

3. Kiri followed the instructions below to decorate a birthday cake. Which cake did she make? Explain your answer.

You will need:

1. Number of candles:



$\frac{1}{4}$ of 16

2. Number of cherries:



$\frac{1}{4}$ of 12

A.



B.



RF1
HW/Est