

# Year 1 Maths Homework

## Count in 5s

1. Colour in the numbers you say when counting in 5s.

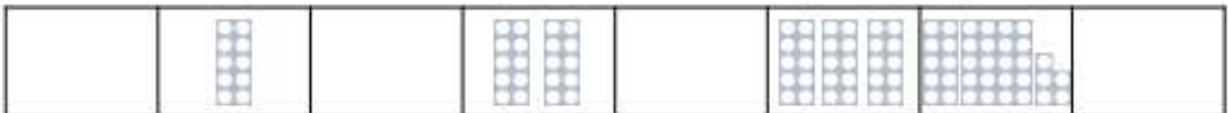
1	2	3	4	5	6	7	8	9	10
11	12	13	14	15	16	17	18	19	20
21	22	23	24	25	26	27	28	29	30
31	32	33	34	35	36	37	38	39	40
41	42	43	44	45	46	47	48	49	50

What do you notice about the numbers?



VF  
HW/Ed

2. Use the cards to complete the missing number track below.



5	10	15	20	25	30	35	40	45	50
---	----	----	----	----	----	----	----	----	----

A.



B.



C.



D.

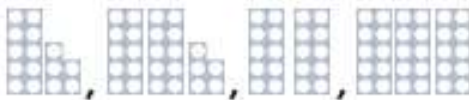


VF  
HW/Ed

3. Two children are sequencing in 5s.



Lucy



15	25	20	30
----	----	----	----



Declan



5	10	15	20
---	----	----	----

Who is correct? Explain how you know.



RPS  
HW/Ed

## Count in 5s

4. Complete the gaps in the grid and colour in the numbers you say when counting in 5s.

1	2	3	4	5	6	7	8	9	10
11	12	13	14	15	16	17	18	19	
21	22	23	24		26	27	28	29	
31	32	33	34		36	37	38	39	
41	42	43	44		46	47	48	49	

What do you notice about the numbers?



VF  
HW/Ext

5. Use the cards to complete the number tracks.




A. 40    B.     C. 25    D.     E.     F. 35



VF  
HW/Ext

6. Two children are sequencing in 5s.



Who is correct? Explain how you know.



IPS  
HW/Ext