








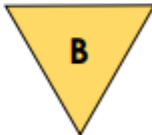

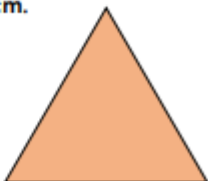


<u>Measure Perimeter</u>	<u>Measure Perimeter</u>
<p>1a. Measure the perimeter of this shape.</p>  <p>☆ VF</p>	<p>1b. Measure the perimeter of this shape.</p>  <p>☆ VF</p>
<p>2a. Match the shape to its perimeter.</p>   <p>12cm 9cm 14cm</p> <p>☆ VF</p>	<p>2b. Match the shape to its perimeter.</p>   <p>15cm 10cm 16cm</p> <p>☆ VF</p>
<p>3a. Which shape has the longest perimeter?</p>   <p>☆ VF</p>	<p>3b. Which shape has the longest perimeter?</p>   <p>☆ VF</p>
<p>4a. True or false? The perimeter of this shape is 14cm.</p>  <p>☆ VF</p>	<p>4b. True or false? The perimeter of this shape is 12cm.</p>  <p>☆ VF</p>

Measure Perimeter


5a. Measure the perimeter of this shape.



VF

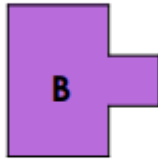
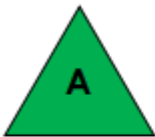
Measure Perimeter

5b. Measure the perimeter of this shape.



VF

6a. Match the shape to its perimeter.



9cm

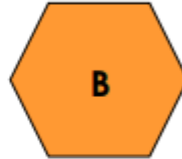
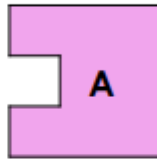
14cm

12cm



VF

6b. Match the shape to its perimeter.



14cm

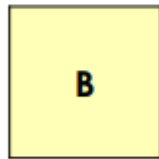
16cm

12cm



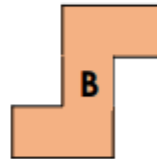
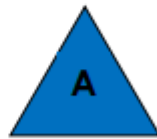
VF

7a. Which shape has the longest perimeter?



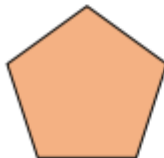
VF

7b. Which shape has the longest perimeter?



VF

8a. True or false? The perimeter of this shape is 12cm.



VF


8b. True or false? The perimeter of this shape is 16cm.



VF

Measure Perimeter

9a. Measure the perimeter of this shape.



VF

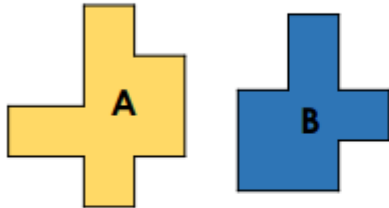
Measure Perimeter

9b. Measure the perimeter of this shape.



VF

10a. Match the shape to its perimeter.



13cm

15cm

11cm



VF

10b. Match the shape to its perimeter.



14cm

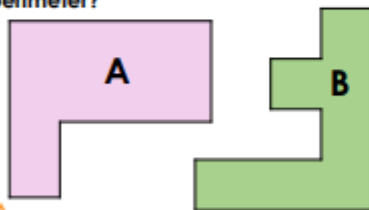
16cm

17cm



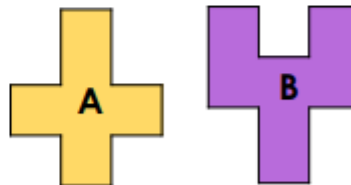
VF

11a. Which shape has the longest perimeter?



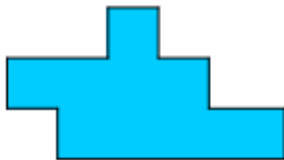
VF

11b. Which shape has the longest perimeter?



VF

12a. True or false? The perimeter of this shape is 19cm.



VF

12b. True or false? The perimeter of this shape is 17cm.



VF