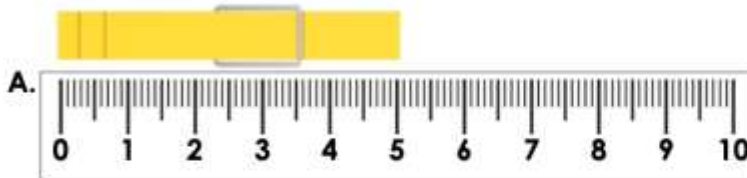


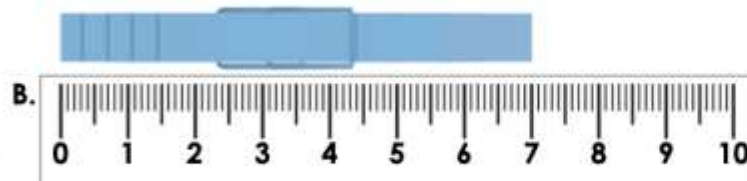
Year 2 Maths homework

Measure Length 2

1. Match each peg to the correct measurement.



7cm

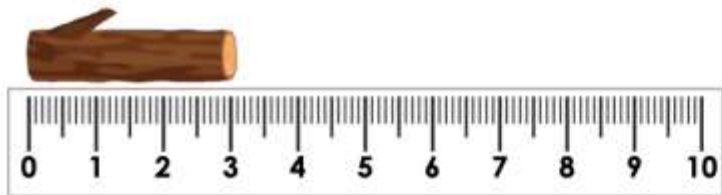


5cm



VF
HW/Ext

2. Use the measurements to complete the sentences below.



A. The log measures ____ cm.




B. The tube measures ____ cm.

C. The _____ is shorter than the _____.



VF
HW/Ext

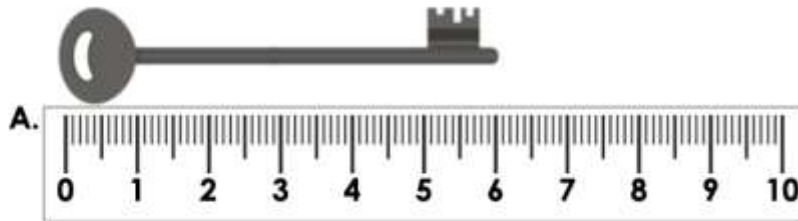
3. Measure the crayons below and order them by height.



RP5
HW/Ext

Measure Length 2

4. Match each key to the correct measurement.



4cm




6cm



VF
HW/Ext


5. Use the measurements to complete the sentences below.



A. The twig measures ____ cm.



B. The leaf measures ____ cm.





C. The _____ is longer than the _____.



VF
HW/Ext

6. Measure the flowers below and order them by height.




RPS
HW/Ext

Challenge

Measure Length 2

7. Match each gardening tool to the correct measurement.



6cm




8cm



VF
HW/Ext

8. Use the measurements to complete the sentences below.



A. The shell measures ___ cm.






B. The twig measures ___ cm.

C. The _____ is longer than the _____.



VF
HW/Ext

9. Measure each cactus below and order them by height.



RPS
HW/Ext