


This week, in maths, your child has been recognising and comparing numbers 6, 7 and 8. This week's Homework is making these numbers on the worksheet or by drawing dominoes in books.


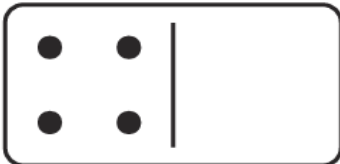
Dotty Dominoes Composition of 6, 7 and 8



Each of my dominoes should have **6** dots in total. Can you draw the missing dots?



Each of my dominoes should have **7** dots in total. Can you draw the missing dots?



Each of my dominoes should have **8** dots in total. Can you draw the missing dots?

