


This week, in maths, your child has been measuring heights of small objects using multilink. For This week's Homework your child can fill in the blanks of the sheet after measuring heights of small toys using cubes or blocks as measuring scale.



The ----- measured-----cubes tall


The -----measured-----cubes tall

The -----measured-----cubes tall


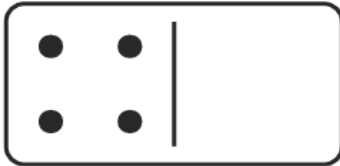
Dotty Dominoes Composition of 6, 7 and 8



Each of my dominoes should have **6** dots in total. Can you draw the missing dots?



Each of my dominoes should have **7** dots in total. Can you draw the missing dots?



Each of my dominoes should have **8** dots in total. Can you draw the missing dots?

