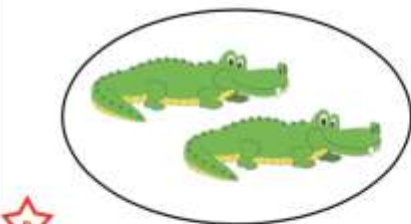
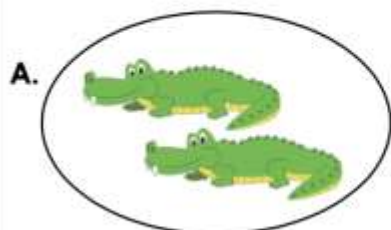


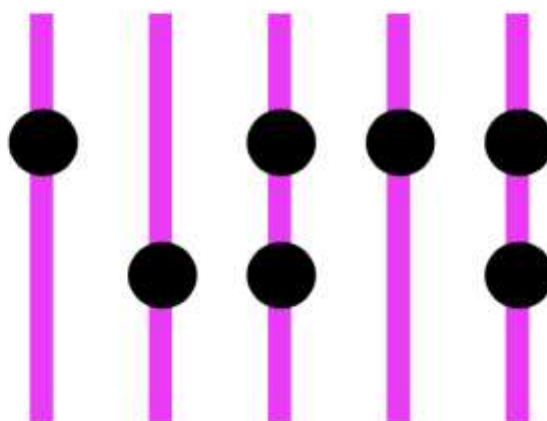
Making Equal Groups

1. Circle all the pictures that show 2 groups of 2.



VF
HW/Ext

2. Draw beads to make each string have the same amount.



VF
HW/Ext

3. True or false? Jenna says that these groups of elephants are equal.



Explain your answer.

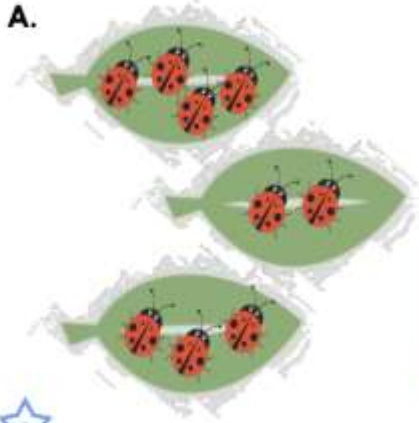


R
HW/Ext

Making Equal Groups

4. Circle all the pictures that show 3 groups of 4.

A.



B.

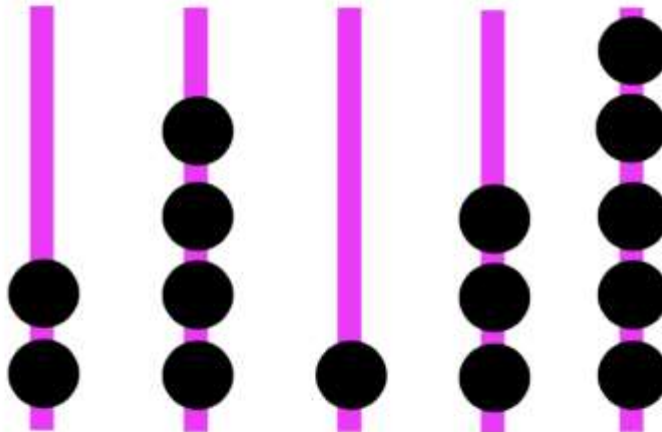


C.



VF
HW/Ext

5. Draw beads to make each string have the same amount..



VF
HW/Ext

6. True or false? Jenna says that these groups of hedgehogs are equal.



Explain your answer.



R
HW/Ext