

Year 2 Maths Homework

Make Equal Groups

1. Steph wants to make 4 equal groups of 5.

			
---	---	--	---

Tick the correct image Steph needs to make all 4 groups equal.


A. 


B. 


C. 


VF
HW/Ext

2. Which 2 groups below show 3 equal groups of 4?

A. 

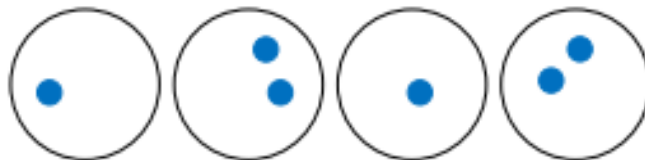
B. 

C. 

D. 

VF
HW/Ext

3. True or false? Milo has made 4 equal groups of 2.



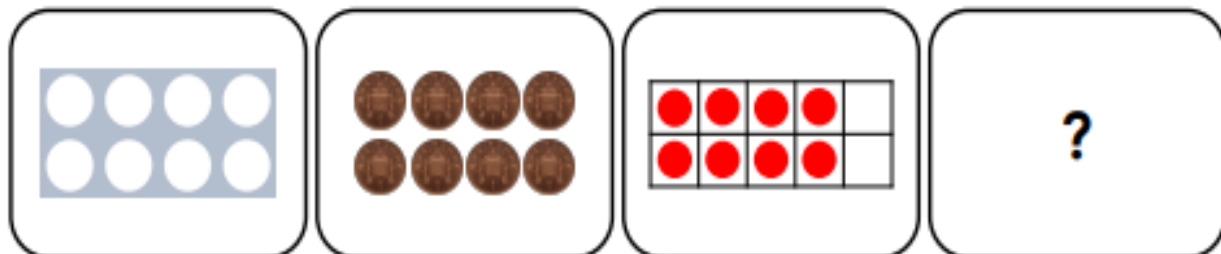
Explain your answer.

Complete the groups to make the statement true.

RPS
HW/Ext

Make Equal Groups

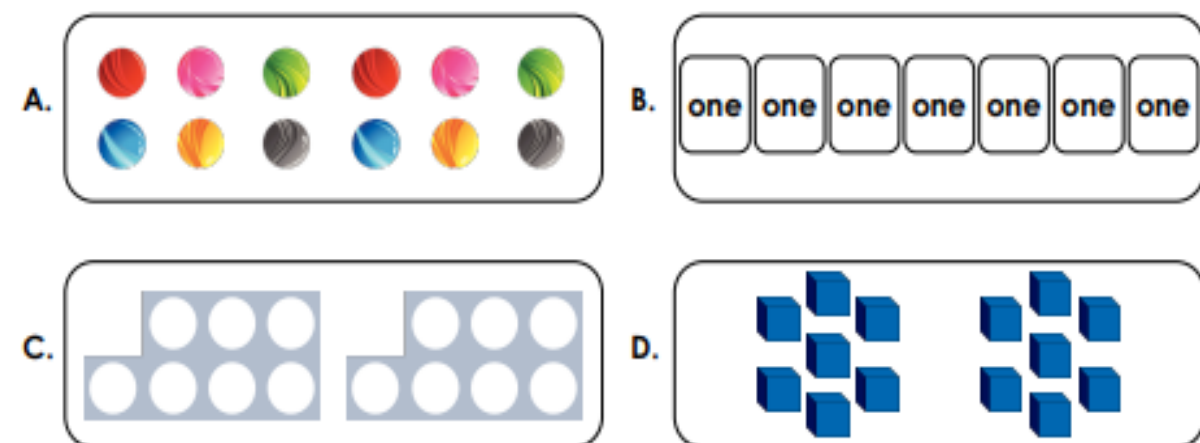
4. Jack wants to make four equal groups.



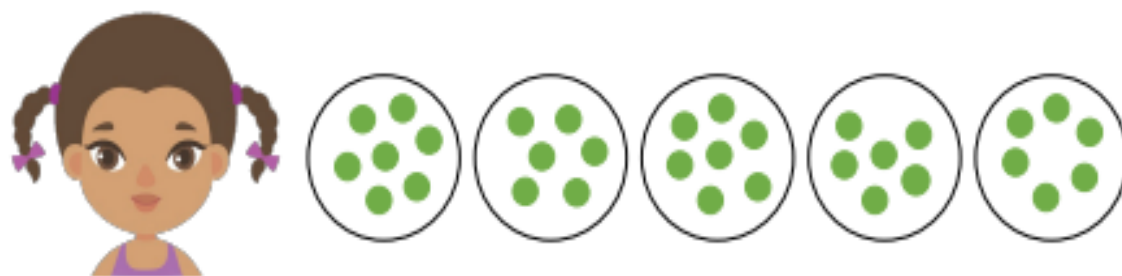
Tick the correct image Jack needs to make all four groups equal.



5. Which groups below show two equal groups of seven?



6. True or false? Lucy has made five equal groups of 7.



Explain your answer.

Complete the groups to make the statement true.

