

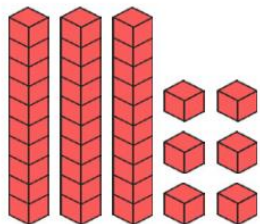


YEAR 1 MATHS
HOMEWORK

Year 1 Maths Activity Mat

Section 1

Write the number in the box.



Section 2

Can I buy the sunglasses?



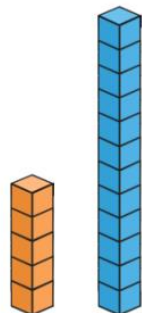
Section 3

What numbers come next?

22	20	18			
----	----	----	--	--	--

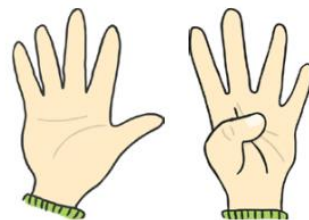
Section 4

How many cubes taller is the blue tower than the orange tower?



Section 5

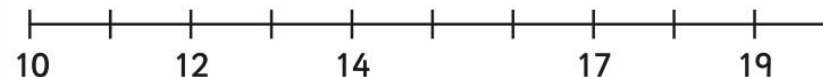
How many fingers are there?



Section 6

Put these numbers on the number line.

11 18 13 16 15 20



Section 7

12 is 1 more than

15 is 1 more than

Section 8

Archie has 5 sausages on his plate.

He eats one.

How many are left?

Write a number sentence so show this.

