



YEAR 1 MATHS  
HOMEWORK

## Representing Objects

7a. Which is the odd one out?

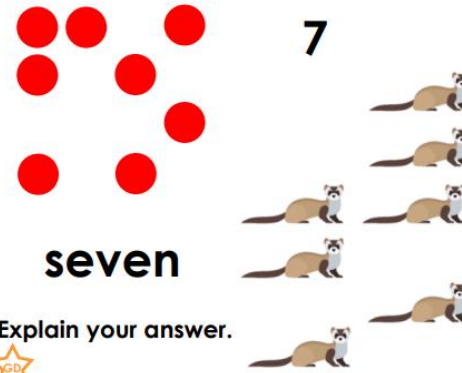


Explain your answer.



## Representing Objects

7b. Which is the odd one out?



Explain your answer.



8a. James says,



If I count all the birds and rabbits, I will say the number 9.




Is he correct?



8b. Aisling says,




If I count all the animals, I will say the number 8.



Is she correct?



9a. Quintin has some fruit and vegetables.



Draw counters to represent the chillies.  
Draw counters to represent the bananas.

Draw counters to represent the chillies and the bananas.



9b. Pip has some fruit and vegetables.



Draw counters to represent the plums.  
Draw counters to represent the star fruits.

Draw counters to represent the plums and the star fruits.

