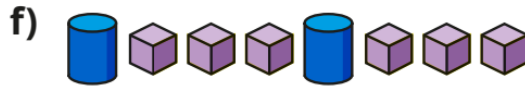
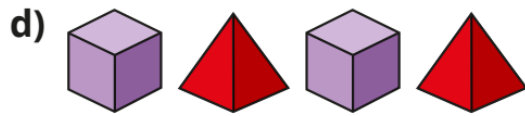
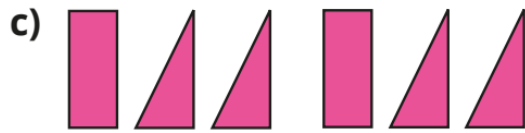





YEAR 2 MATHS
HOMEWORK

1 Draw the next two shapes in each pattern.



2 What is the name of the 3rd shape in the pattern?



3



My pattern goes:
circle, triangle, square,
then it repeats.

- a) Draw the first 9 shapes in Tiny's pattern.
- b) What is the name of the 10th shape in the pattern?
- c) What is the name of the shape to the right of the 5th shape?

4

Which picture shows the pattern:
cylinder, pyramid, pyramid, cylinder, pyramid,
pyramid?

