



YEAR 2 MATHS  
HOMEWORK

3



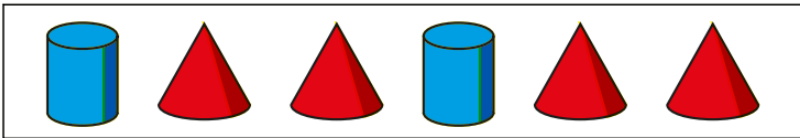
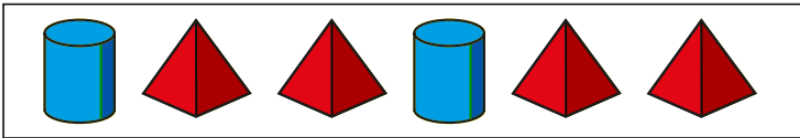
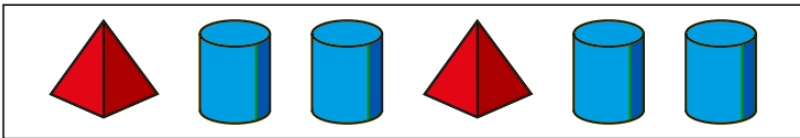
My pattern goes:  
circle, triangle, square,  
then it repeats.

- a) Draw the first 9 shapes in Tiny's pattern.
- b) What is the name of the 10th shape in the pattern?
- c) What is the name of the shape to the right of the 5th shape?



4

Which picture shows the pattern:  
cylinder, pyramid, pyramid, cylinder, pyramid,  
pyramid?

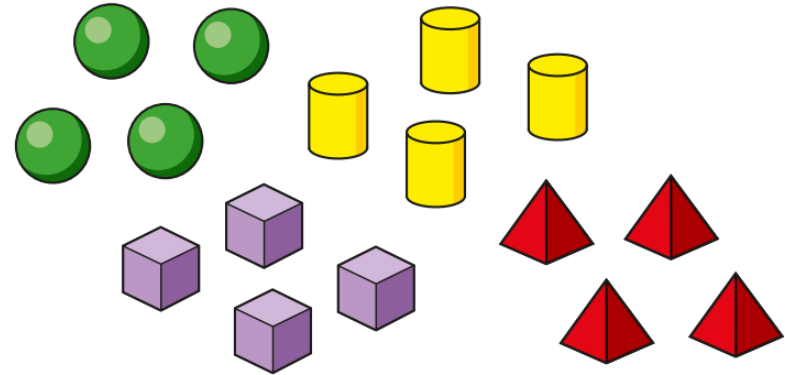


5

Mo makes a pattern using 4 rectangles, 4 triangles and 4 circles.  
What could Mo's pattern be?  
Draw two different possibilities.

6

Kim is making a pattern using these shapes.



- a) What pattern could Kim make?
- b) Can you arrange Kim's shapes to make a symmetrical pattern?

Compare answers with a partner.