





11/10/23

Year 2 Maths Homework

Please complete the following sheet.

Add and subtract 1s

- 1** a) Max has 6 cookies. 
Jo gives him one more cookie.
How many cookies does he have now?
- b) Ben has 4 cookies. 
He eats one of his cookies.
How many cookies does he have now?

2 Complete the number tracks.

a)

21		23					
----	--	----	--	--	--	--	--

b)


47		45					
----	--	----	--	--	--	--	--

c)

				5					10
--	--	--	--	---	--	--	--	--	----

3 Work out the calculations.

- a) $14 + 1$ e) $19 - 1$
b) $22 + 1$ f) $33 + \square = 34$
c) $54 + 1$ g) $18 = 19 - \square$
d) $1 + 61$ h) $89 - 1$

- 4** a) Mo has made a number using base 10
What number has Mo made? 

b) Kim also makes a number using base 10
Kim's number is one more than Mo's number.
What is Kim's number?

c) Ron's number is 2 more than Mo's number.
What is Ron's number?

d) Sam's number is 1 less than Mo's number.
What is Sam's number?

5 Work out the calculations.

- a) $14 + 2$ e) $19 - 2$
b) $22 + 3$ f) $33 + \square = 35$
c) $54 + 4$ g) $12 = 19 - \square$
d) $5 + 61$ h) $89 - 3$

6 Are the number sentences true or false?

- a) $17 + 1 = 1 + 17$
b) $17 - 1 = 1 - 17$

Talk about your answers with a partner.

