

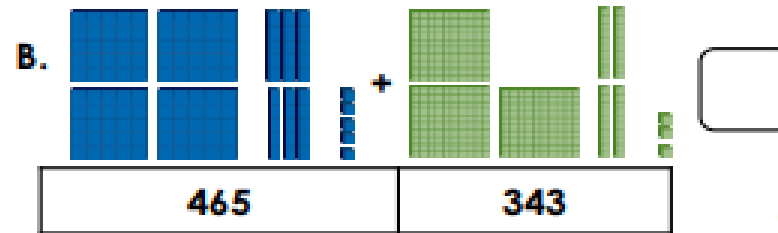
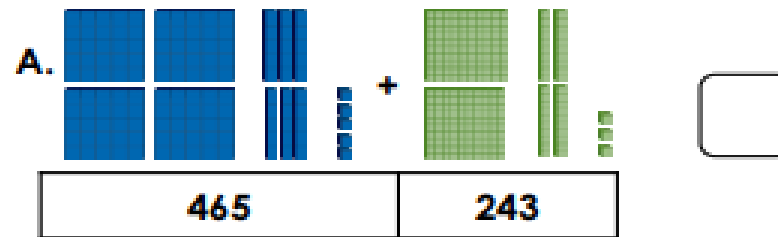
03/10/23

Year 5/6 Maths Homework

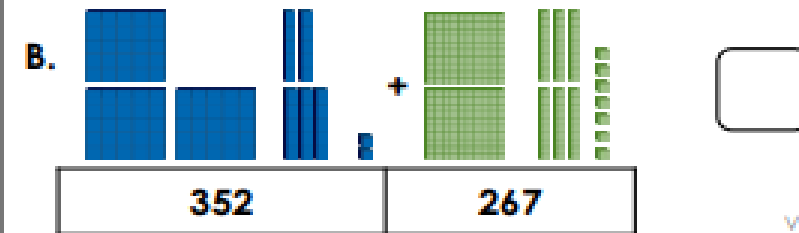
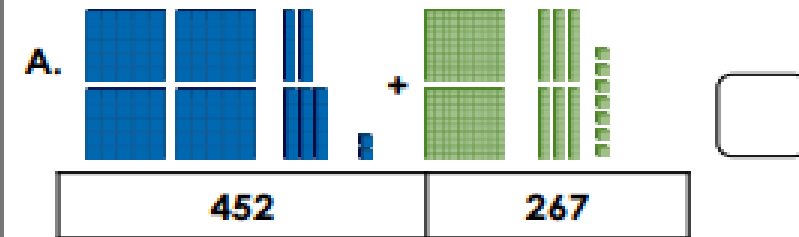
Compare Calculations

• Year 5

1a. Tick the calculation below that has the greater answer.



1b. Tick the calculation below that has the greater answer.



2a. Write $<$, $>$ or $=$ to compare the calculations.

A. $38 + 54$ $54 + 28$

B. $152 + 47$ $47 + 152$

C. $738 - 316$ $738 - 313$

VF

2b. Write $<$, $>$ or $=$ to compare the calculations.

A. $67 + 29$ $29 + 77$

B. $285 - 62$ $285 - 64$

C. $473 + 219$ $219 + 473$

VF

Year 6

Division Worksheet

1 a. $\begin{array}{r} \overline{7)48} \end{array}$	1 b. $\begin{array}{r} \overline{7)39} \end{array}$	1 c. $\begin{array}{r} \overline{8)29} \end{array}$
2 a. $\begin{array}{r} \overline{9)82} \end{array}$	2 b. $\begin{array}{r} \overline{7)12} \end{array}$	2 c. $\begin{array}{r} \overline{6)35} \end{array}$
3 a. $\begin{array}{r} \overline{9)20} \end{array}$	3 b. $\begin{array}{r} \overline{6)41} \end{array}$	3 c. $\begin{array}{r} \overline{6)45} \end{array}$

Division Worksheet

1 a. $\begin{array}{r} \overline{7)724} \end{array}$	1 b. $\begin{array}{r} \overline{9)382} \end{array}$	1 c. $\begin{array}{r} \overline{3)761} \end{array}$
2 a. $\begin{array}{r} \overline{9)373} \end{array}$	2 b. $\begin{array}{r} \overline{4)331} \end{array}$	2 c. $\begin{array}{r} \overline{9)940} \end{array}$
3 a. $\begin{array}{r} \overline{8)923} \end{array}$	3 b. $\begin{array}{r} \overline{7)283} \end{array}$	3 c. $\begin{array}{r} \overline{9)894} \end{array}$