
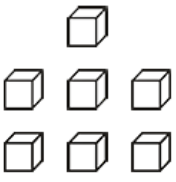
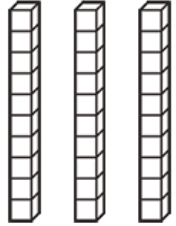



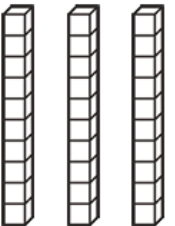
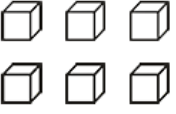
Y1 Week 1 Maths Homework-

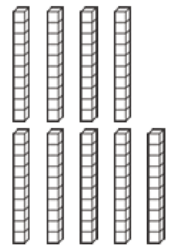
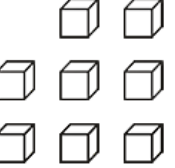
Friday 15th September- return on 20th September


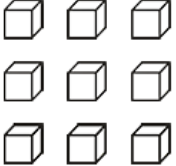
How Many Tens and Ones?

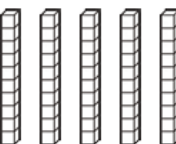
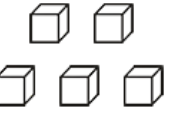
	
tens	ones

	
tens	ones

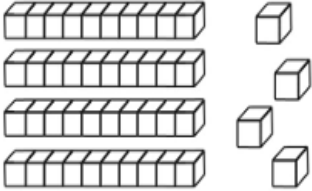
	
tens	ones

	
tens	ones

	
tens	ones

	
tens	ones

Place Value

Number	Words	Expanded Form	Picture
	___tens ___ones	$50 + 2 = \underline{\quad}$	
	3 tens 9 ones	$\underline{\quad} + \underline{\quad} = \underline{\quad}$	
	___tens ___ones	$20 + 7 = \underline{\quad}$	
	___tens ___ones	$\underline{\quad} + \underline{\quad} = \underline{\quad}$	
75	___tens ___ones	$\underline{\quad} + \underline{\quad} = \underline{\quad}$	
15	___tens ___ones	$\underline{\quad} + \underline{\quad} = \underline{\quad}$	
	___tens ___ones	$70 + 8 = \underline{\quad}$	

Chilli Challenge: Nice and Spicy!



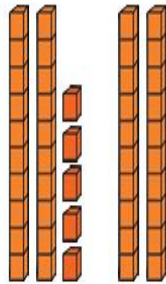
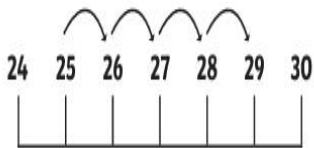
Methods

Add and subtract numbers using concrete objects, pictorial representations, and mentally.

a two-digit number and ones. a two-digit number and tens.

$$25 + 4 = \square$$

$$25 + 20 = \square$$



Chilli Challenge: Nice and Spicy!



Number Facts

Recall and use addition and subtraction facts to 10 fluently, and derive and use related facts up to 20.

$$5 + 3 = 8$$

What is $15 + 3$?