



20/09/23

Year 1 Maths Homework

- Year 1

Please complete the following sheet.

1) How many birds are there?



2) How many worms are there?

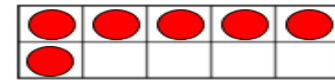


3) Match the numbers to the images.

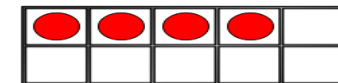
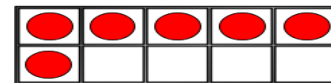
six

3

four



Choose words to complete the sentence.



less than

greater than

equal to

6 is _____ 4

Have a think

Write $<$, $>$ or $=$ in the circle.

6 4

Here is a video to help with greater than, less than symbols:

<https://youtu.be/ka9zbPcqXBI?si=b8l7T8CdJbVJeJek>

Compare numbers

White
Rose
Maths

1 Write the missing phrase.

less than

greater than

equal to

a) 4 is _____ 5

b) 5 is _____ 9

c) 7 is _____ seven.

2 Write $<$, $>$ or $=$ to compare the numbers.

a) 4 ○ 5

e) 8 ○ 2

b) 5 ○ 9

f) 3 ○ 8

c) 7 ○ 7

g) 6 ○ 0

d) 1 ○ 2

h) 4 ○ 9

3 One of these statements is false.

$3 < 6$

$7 > 10$

$5 < 8$

Use cubes to show which one is false.

4 Write the missing numbers.

a) $4 > \square$

d) $7 < \square$

b) $\square < 2$

e) $9 = \square$

c) $\square > 7$

f) $1 > \square$

Is there more than one answer for each?

5 Tiny is thinking of a number.

5 is greater
than my number.



What could Tiny's number be?

Colour all the possible numbers.

0	1	2	3	4	5	6	7	8	9	10
---	---	---	---	---	---	---	---	---	---	----