

## Year 1 – Maths Homework

To help you understand what we have been learning this week I would like you to complete the following questions into your homework book.

I would also like you to spend some time reading with an adult at home and to write this down in the reading record tracking sheet in the front of your homework book.

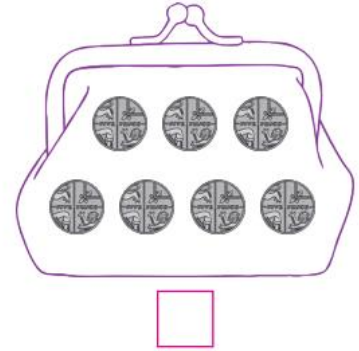
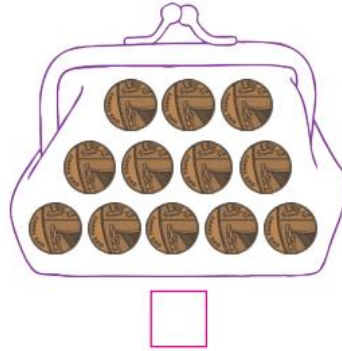
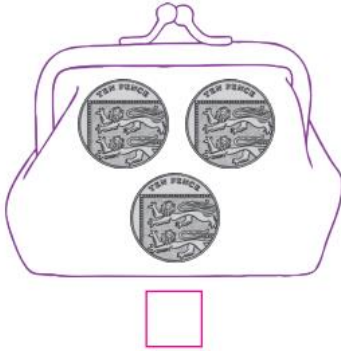
Remember homework is due in on **WEDNESDAY 12<sup>th</sup> JULY 2023.**

# Money, Money, Money

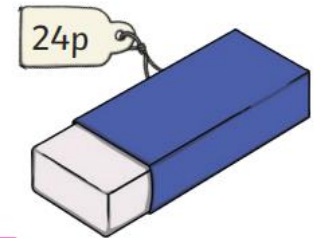

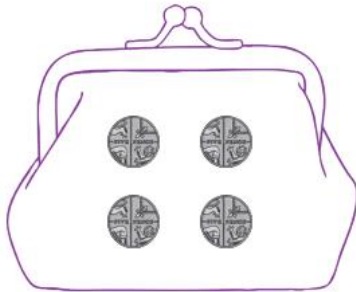
To recognise the value of a set of coins.



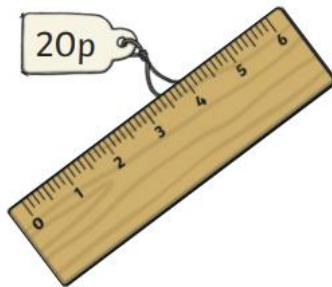
Tick the purse that has the **highest** value.



Tick the purse that we can use to buy the rubber.



Draw the coins you could use to buy this ruler.



**Challenge:** How many different sets of coins could you use to pay for the ruler?

# Spending Money

## Spending Money - £6

Kemal and Olivia have £6 to spend.


For each item, show how much money they would have left after buying the toy.



£1



£4



£2


--	--	--



£5



£3



£6

--	--	--