

## Year 2 – Maths Homework

To help you understand what we have been learning this week I would like you to complete the following questions into your homework book.

I would also like you to spend some time reading with an adult at home and to write this down in the reading record tracking sheet in the front of your homework book.

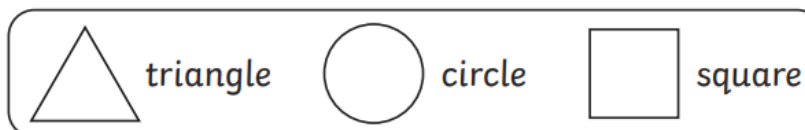
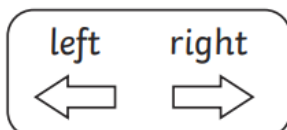
Remember homework is due in on **WEDNESDAY 5<sup>th</sup> JULY.**

Answer the following questions in your homework book.

## Describing Position

To use the words 'left', 'right', 'above' and 'below' to describe position.

Describe the position of each shape by adding in the correct word.



The triangle is to the \_\_\_\_\_ of the circle.

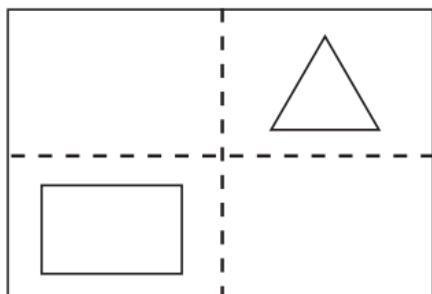
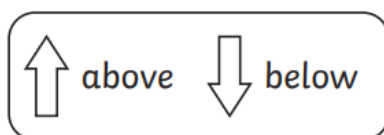
The square is to the \_\_\_\_\_ of the circle.

-----

The circle is to the \_\_\_\_\_ of the triangle.

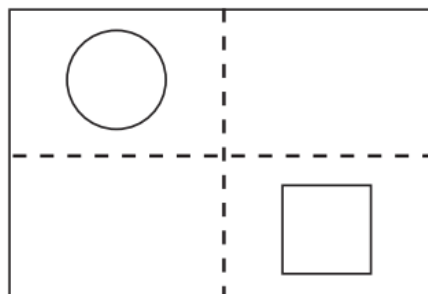
The circle is to the \_\_\_\_\_ of the square.

Read the clues and draw the shapes.



Draw a circle above  
the rectangle.

Draw a square below  
the triangle.

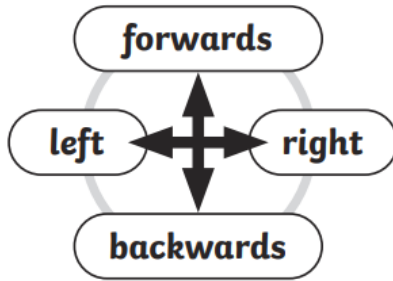






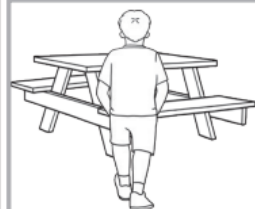

Draw a triangle to the  
right of the circle.

Draw a rectangle to the  
left of the square.

# Describing Movement

To use the words 'left', 'right', 'forwards' and 'backwards' to describe movement.



 climbing frame	 roundabout	 swings
 see-saw	 picnic table	 slide


Give directions from the picnic table to each activity.

roundabout

<b>forwards</b>	<b>1</b>
-----------------	----------




swings





slide

--	--



climbing frame

see-saw

--	--

