


16/06/23

Year 5/6 Maths Homework



Year 5

Question 2: Work out each of the following multiplications

- | | | | |
|------------------------|-------------------------|------------------------|------------------------|
| (a) 0.2×10 | (b) 0.8×10 | (c) 0.1×10 | (d) 1.3×10 |
| (e) 5.8×10 | (f) 15.1×10 | (g) 20.5×10 | (h) 357.4×10 |
| (i) 0.06×10 | (j) 0.14×10 | (k) 0.42×10 | (l) 3.07×10 |
| (m) 0.009×10 | (n) 0.0053×10 | (o) 0.105×10 | (p) 0.0381×10 |
| (q) 3.4905×10 | (r) 0.25801×10 | (s) 400.05×10 | (t) 122.08×10 |

Question 3: Work out each of the following multiplications

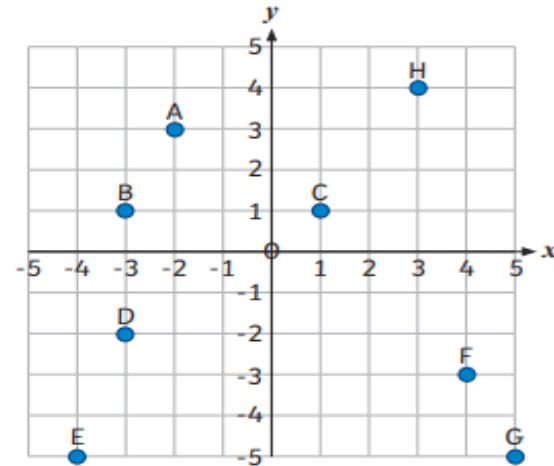
- | | | | |
|-----------------------|-----------------------|-----------------------|------------------------|
| (a) 4×100 | (b) 7×100 | (c) 15×100 | (d) 28×100 |
| (e) 30×100 | (f) 90×100 | (g) 165×100 | (h) 593×100 |
| (i) 520×100 | (j) 203×100 | (k) 400×100 | (l) 100×100 |
| (m) 2000×100 | (n) 3902×100 | (o) 2030×100 | (p) 40001×100 |

Year 6

Read and Plot Points in Four Quadrants

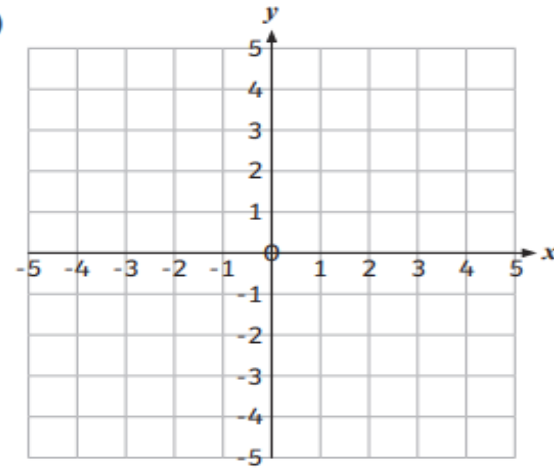


1) Write the coordinates for each point, A to H.



A (____, ____)	B (____, ____)
C (____, ____)	D (____, ____)
E (____, ____)	F (____, ____)
G (____, ____)	H (____, ____)

2)



- a) Plot these coordinates on the grid.
 $(-5, -2)$, $(-2, -2)$, $(-2, -4)$, $(-5, -4)$
- b) Use a ruler to draw straight lines to join the points and form a quadrilateral.
-