






# Telling the Time

Write down the time each clock is showing on the line underneath.





# Peter Rabbit Tell the Time


Peter Rabbit is having a busy day. He is not sure where the time has gone! Read or write the time on the clock to show what Peter Rabbit has been doing all day.



At \_\_\_\_\_, Peter Rabbit woke up.



At \_\_\_\_\_, Peter Rabbit ate 2 carrots for breakfast.




At \_\_\_\_\_, Peter Rabbit went out to find his friend, Benjamin Bunny.




At \_\_\_\_\_, Peter Rabbit and his friends went into Mr. McGregor's garden.




At \_\_\_\_\_, Peter Rabbit had some tasty radishes in Mr. McGregor's garden.



Draw the hands on the clock to show that Peter Rabbit was chased by Mr. McGregor at twenty-five to 3.



Draw the hands on the clock to show that Peter Rabbit escaped at twenty-five past 4.



Draw the hands on the clock to show that Peter Rabbit ate some strawberries at ten past 5.

## Challenge

### Compare Durations of Time

1a. Who is correct? Explain how you know.

I left home at half past seven and arrived at school at eight o'clock. It took me longer to get to school.



Kevin



Jasmine

I left home at quarter past seven and arrived at school at half past seven. It took me longer to get to school.



R

### Compare Durations of Time

1b. Who is correct? Explain how you know.

I left school at half past six and got home at quarter past seven. It took me longer to get home.



Nami



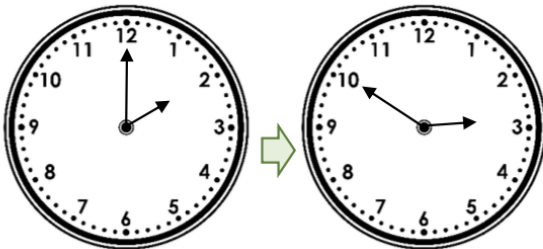
Jing

I left school at seven o'clock and got home at half past seven. It took me longer to get home.



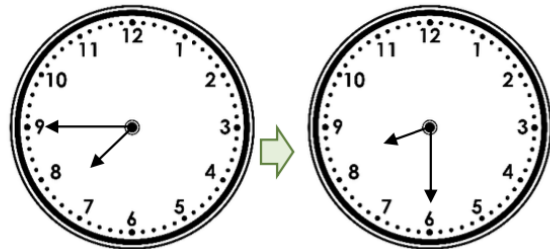
R

2a. It takes Jillian 10 minutes to decorate one cupcake. How many cupcakes can she decorate in this duration of time?



PS

2b. It takes Kieran 15 minutes to read one chapter of his book. How many chapters can he read in this duration of time?



PS

3a. Complete the table.  
Journey A departs at 6 o'clock and lasts for half an hour.  
Journey B lasts for 20 minutes.  
Journey C is the longest by 10 minutes.

	Depart Brighouse	Arrive Halifax
A		
B		10 minutes to 7
C	20 minutes to 7	



PS

3b. Complete the table.  
Journey A lasts for 30 minutes.  
Journey B departs at 3 o'clock and lasts for 40 minutes.  
Journey C is the shortest by 10 minutes.

	Depart Leeds	Arrive Garforth
A		10 minutes past 3
B		
C	20 minutes past 3	



PS