


Quarter Past and Quarter To

1. Look at the clocks below. Use to and past to fill in the blanks.

A. The time is quarter 7.

B. The time is quarter 6.



VF
HW/Ext

2. Draw the minute hands to complete the clock patterns adding 15 minutes more each time.

A.



Quarter past 2



Half past 2



Quarter to 3

B.



5 o'clock



Quarter past 5



Half past 5



VF
HW/Ext

3. Billy the Bear wants his snack but he won't get it if he is too early or too late! His snack time is at quarter past 1.



I can't get my snack because I am too early.



Do you agree with Billy? Complete the clock to help you explain why.



PS
HW/Ext



Do you agree with Maria's claim that you can't see the clock?



Because I saw the clock.
I can't see the clock.





What time is it quarter past 3?

9. Maria the wolf wants his clock but he won't get it if he is too early or too late his



B.



A.



What time is it?

9. Draw the hour and minute hands to complete the clock between adding 15 minutes



Quarter 8.

Quarter 9.

What time will it be in an hour?

What time will it be in 30 minutes?



A. The time is quarter 8.

B. The time is quarter 9.

10. Look at the clocks below. Use to and to fill in the blanks.

Quarter past and Quarter to