

Year 2 Maths Homework

Find a Half

1. Complete the missing numbers.



VF
HW/Ext

2. Match the whole number to its half.



VF
HW/Ext

3. Polly has £5 to spend. Which of these items can she afford in the half price sale? Explain your answer.

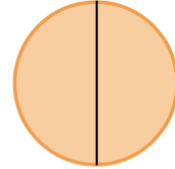
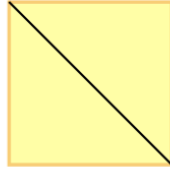

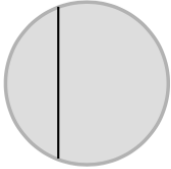
Half Price Sale



RPS
HW/Ext

Make Equal Parts

1. Match the shapes below to the number of equal and unequal parts they have.



two equal parts


two unequal parts



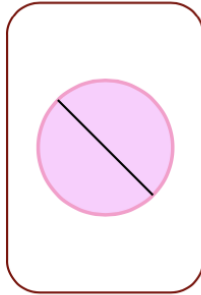
VF
HW/Ext

2. How many equal parts do the representations below have?


A.




B.



C.



D.

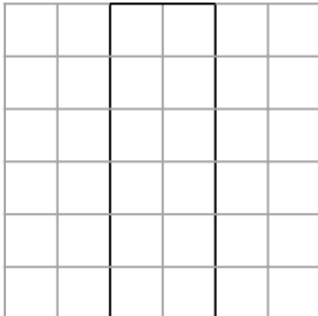




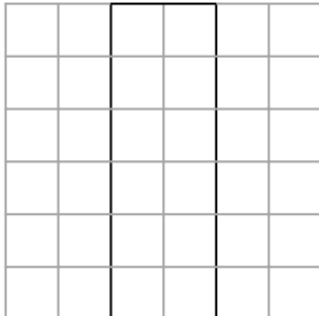
VF
HW/Ext

3. Find three different ways of splitting a rectangle into two equal parts.

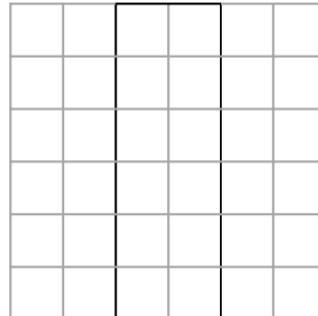
A.



B.



C.



RPS
HW/Ext

