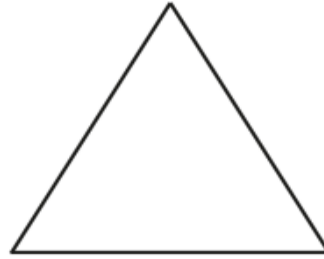


10/03/23

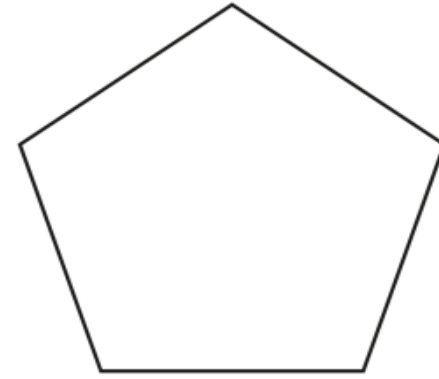
Year 5/6 Maths Homework

Perimeter of Polygons

Calculate the perimeter of the following polygons.



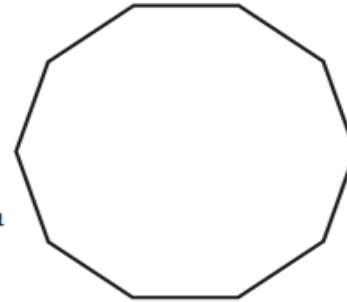
Perimeter _____ cm



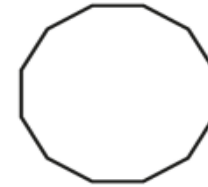
Perimeter _____ cm



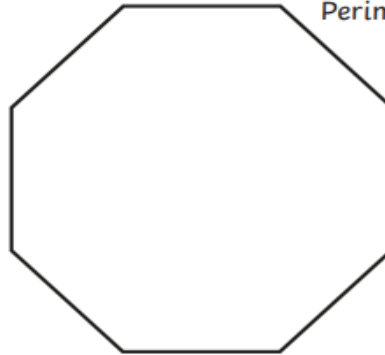
Perimeter _____ cm



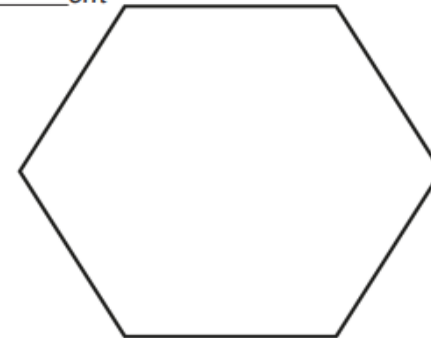
Perimeter _____ cm



Perimeter _____ cm



Perimeter _____ cm



Perimeter _____ cm

- Year 5

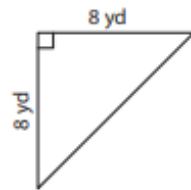
Year 6

Area of a Triangle

T1L1S1

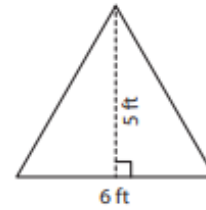
Find the area of each triangle.

1)



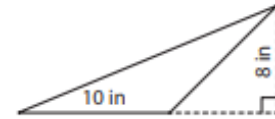
Area =

2)



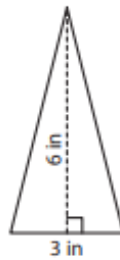
Area =

3)



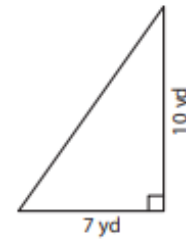
Area =

4)



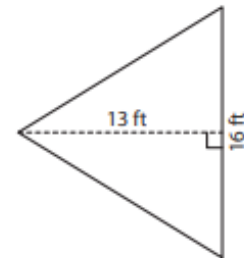
Area =

5)



Area =

6)



Area =