

Year 1 – Maths Homework

To help you understand what we have been learning this week I would like you to complete the following questions into your homework book.

I would also like you to spend some time reading with an adult at home and to write this down in the reading record tracking sheet in the front of your homework book.

Remember homework is due in on **WEDNESDAY 15th MARCH.**

Answer the following questions in your homework book.

Longer or Shorter?

To compare the length of objects.




Tick the shortest.



Tick the longest.



Tick the longest.



Tick the shortest.




Complete the sentences using **longer** or **shorter**.



The bus is _____ than the car.

The car is _____ than the bus.

Complete the sentences using **longer** or **shorter**.



The tractor is _____ than the train.

The train is _____ than the tractor.

Shorter or Taller?

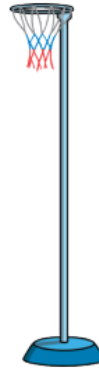
To compare the heights of objects.




Draw a taller bin.



Draw a shorter hoop.



Complete the sentences using **taller, shorter** or **the same**.



The girl is _____ than the boy.
The boy is _____ than the girl.

Complete the sentences using **taller, shorter** or **the same**.



The wellies are _____ than the trainers.
The trainers are _____ than the wellies.

Complete the sentences using **taller, shorter** or **the same**.



The glass is _____ than the jug.
The jug is _____ than the glass.

Complete the sentences using **taller, shorter** or **the same**.



The chair is _____ height as the stool.
The stool is _____ height as the chair.