

8/02/23

Year 5/6 Maths Homework

Year 5

## Thousandths as Fractions and Decimals

Type in the numerator of the fraction that each chart shows, then drag and drop the correct matching decimal into the box.

0.899


0.056

0.005

0.100

0.172


0.010



Fraction:

1000


Decimal:



Fraction:

1000


Decimal:



Fraction:

1000

Decimal:



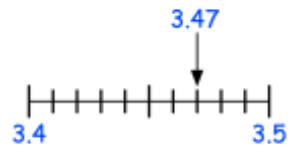
Fraction:

1000

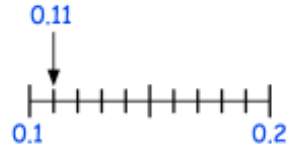
Decimal:

Question 1: Round each of the numbers below to 1 decimal place.

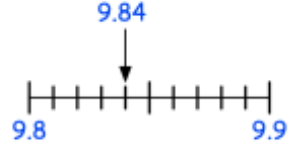
(a) 3.47



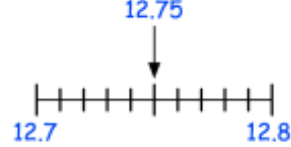
(b) 0.11



(c) 9.84



(d) 12.75



Question 2: Round each of the following numbers to 1 decimal place.

(a) 4.82   (b) 6.19   (c) 9.77   (d) 10.63   (e) 21.41   (f) 3.14   (g) 48.18

(h) 29.26   (i) 80.85   (j) 0.43   (k) 248.38   (l) 637.51   (m) 62.89   (n) 9.99

- Year 6