

Year 1 – Maths Homework

To help you understand what we have been learning this week I would like you to complete the following questions into your homework book.

I would also like you to spend some time reading with an adult at home and to write this down in the reading record tracking sheet in the front of your homework book.

Remember homework is due in on **WEDNESDAY 30th NOVEMBER.**

Answer the following questions in your homework book.

Introducing Greater Than, Less Than and Equal To

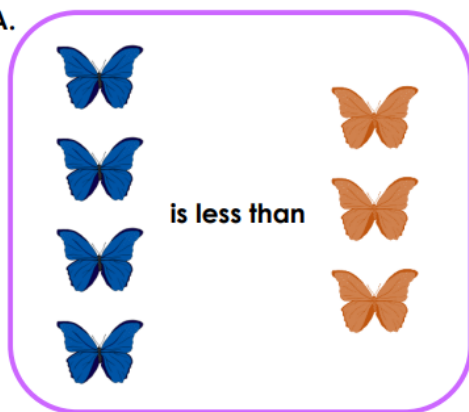
1. Draw some objects on the other side to make the statement correct.



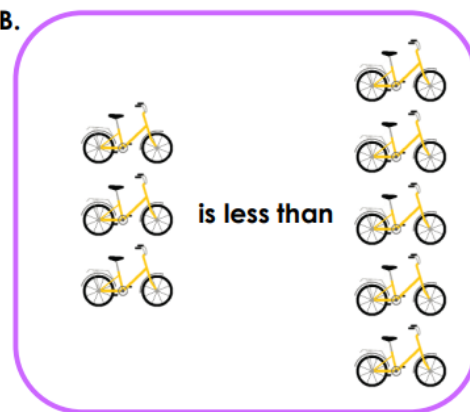
V
HW/Ex

2. Tick the statement that is correct.

A.



B.



V
HW/Ex

3. May is looking at these animals. She says,



3 is less than 4


Is she correct? Explain why.



RP:

Introducing Greater Than, Less Than and Equal To

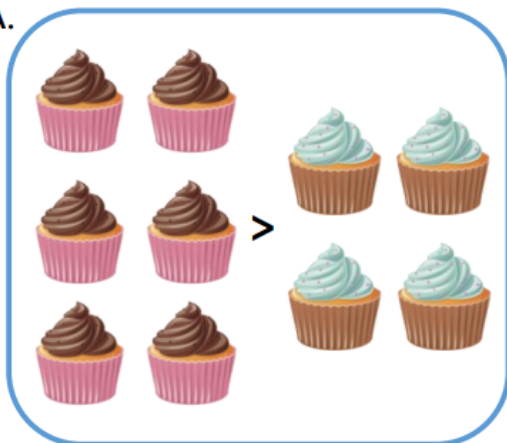
4. Draw up to 10 objects on the other side to make the statement correct.




VF
HW/Ext

5. Tick the statement that is correct.

A.



B.



VF
HW/Ext

6. Lou is looking at these objects. He says,



$$9 < 6$$

Is he correct? Explain why.

Introducing Greater Than, Less Than and Equal To

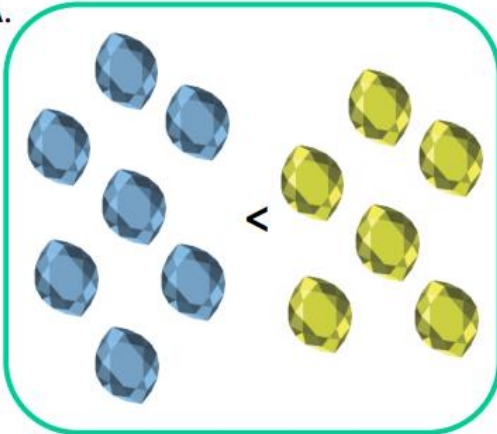
7. Draw objects on both sides to make the statement correct with no more than 10 objects on each side.




VF
HW/Ext

8. Tick the statement that is correct.

A.



B.



VF
HW/Ext

9. Dee is looking at these objects. she says,



Ten > 7

Is she correct? Explain why.

