

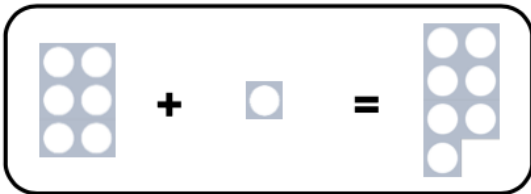


Fact Families Addition

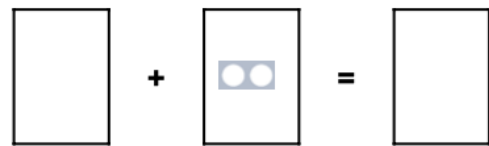

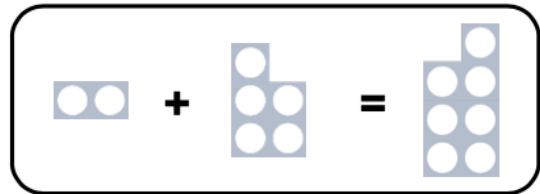
1a. Draw the missing Numicon.



VF



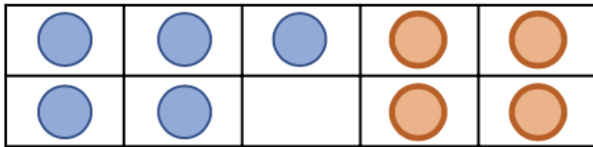
Fact Families Addition

1b. Draw the missing Numicon.



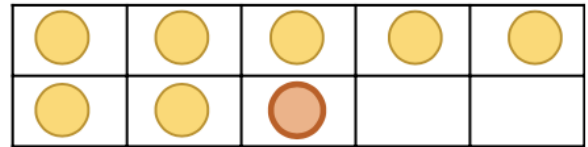
VF

2a. Complete the number sentences using the ten frame.




VF

2b. Complete the number sentences using the ten frame.




VF

3a. Use the pictures to show two addition number sentences.



VF


3b. Use the pictures to show two addition number sentences.



VF

Fact Families Addition

1a. Circle 3 Numicon which could be used to make a number sentence.




Use them to make 2 addition number sentences.



PS

Fact Families Addition

1b. Circle 3 Numicon which could be used to make a number sentence.



Use them to make 2 addition number sentences.



PS

2a. Circle the incorrect number sentence below.

a. + =

b. + =

Explain why it is incorrect.



R

2b. Circle the incorrect number sentence below.

a. + =

b. + =

Explain why it is incorrect.



R

3a. What could the missing numbers be? Draw all the possibilities.

= +

= +



PS

3b. What could the missing numbers be? Draw all the possibilities.

+ =

+ =



PS