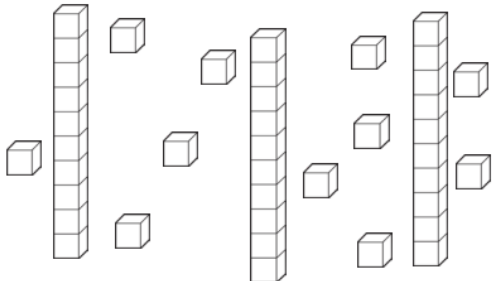


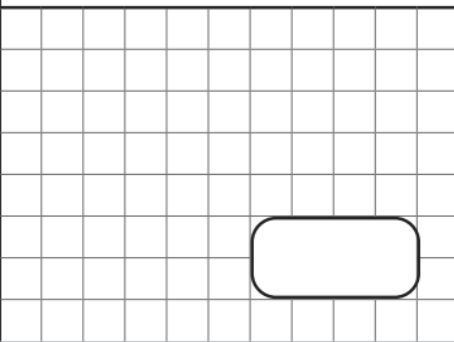
Year 2 – Maths


Write the answers in your homework book.

1	a) What number is being shown with tens and ones?	
		b) What is 10 more than the number shown?
		c) What is 10 less than the number shown?

2	Complete the number sequence.
	0 2 4 _ _ _ 12 14 _

3	Mia rolls 3 dice. The numbers total 17. What numbers did Mia roll?
	<input type="text"/> <input type="text"/> <input type="text"/>

4	$\frac{1}{2}$ of 12 =
	

5	Circle the coins that make 57p.
	

1

Match the numbers to the words.

30

13

31

thirteen

thirty-one

thirty

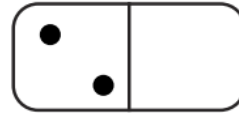
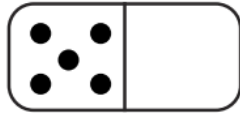
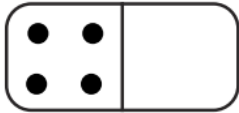
2

How many hours are there in a day?

3

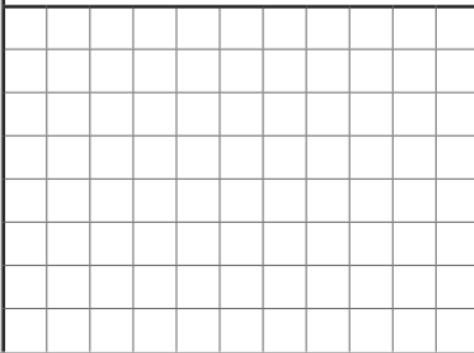
Each domino should show a total of 8 spots.

Complete each one.



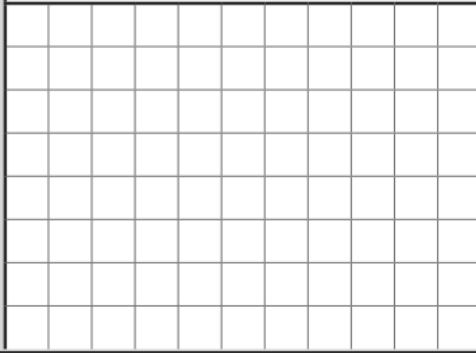
4

$$15 \div \square = 3$$

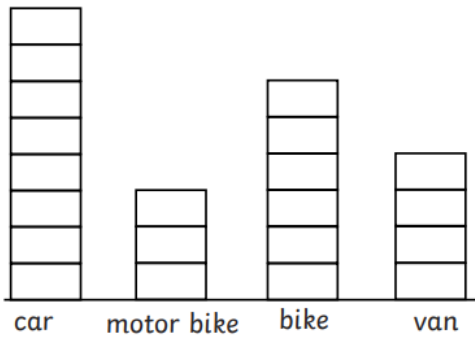


5

$$7 + 30 = \square$$



1 This block diagram shows the results of a traffic survey.

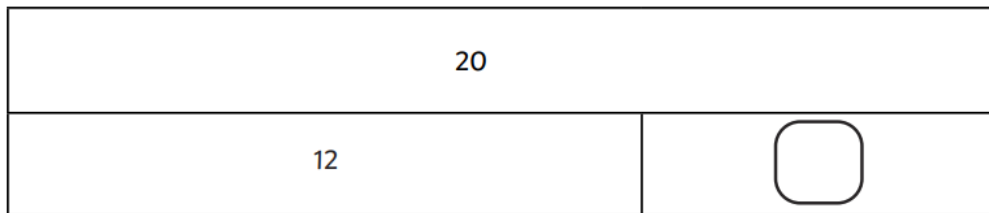


a) What was the most common vehicle?

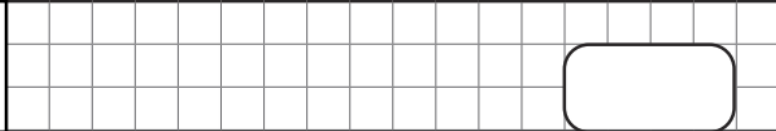
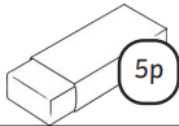
b) How many vans were counted?

c) Which vehicle was counted only 3 times?

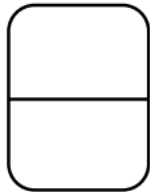
2 Complete this bar model.



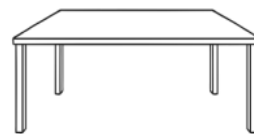
3 Rubbers costs 5p each. Cole spent 35p on rubbers. How many rubbers did he buy?



4 Write the fraction two-quarters.



5 Draw a cat **under** the table.



1 Use the data from the tally chart to complete the block diagram.

	dog	
	cat	
	fish	

2 Compare these measurements using $<$, $>$ and $=$.





1m and 31cm 131cm 112cm 1m and 21cm

3 Zia puts 18 socks into pairs. How many pairs does he have altogether?

4 $2 + 7 + 3 =$

5 $80 - 1 =$

1 Can you explain the mistake?

	2D shapes	3D shapes
vertices		
no vertices		

2 If today is Monday, what day was it yesterday?

3 Enzo drinks half of the 60ml of juice in his carton. How much is left?

4 $7 \times 10 =$

5 $29 + 37 =$
