



23/06/22

Year 5/6 Maths Homework

- Year 5

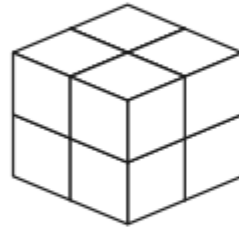


Estimating Volume

I can estimate the volume of shapes.

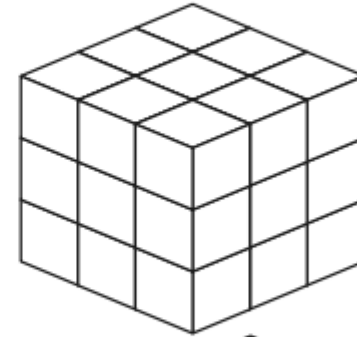


1. Each of these shapes has been built with centimetre cubes. Choose the correct volume for each shape. Tick the correct answer.



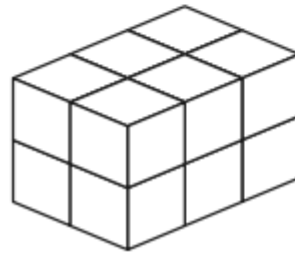
a) Volume =

- 4cm^3
- 8cm^3



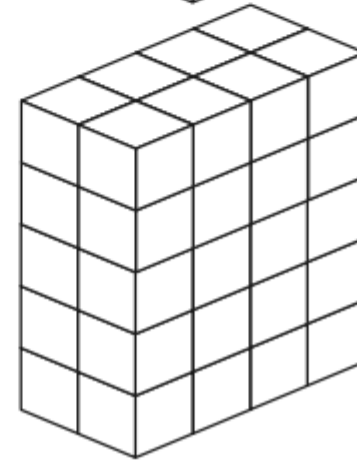
b) Volume =

- 25cm^3
- 27cm^3



c) Volume =

- 16cm^3
- 12cm^3



d) Volume =

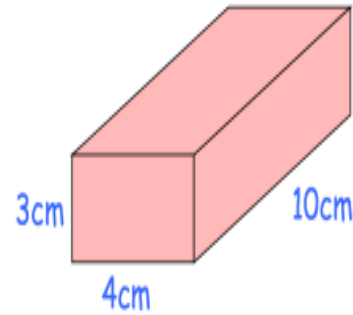
- 40cm^3
- 42cm^3

- Year 6

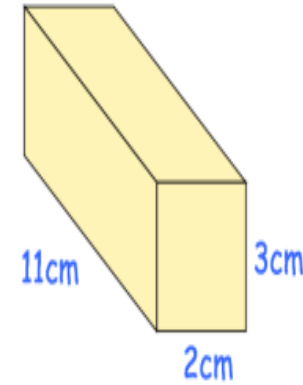
- The Formula of a cuboid is
- $l \times w \times h$

Question 1: Work out the volume of each cuboid.
Include suitable units.

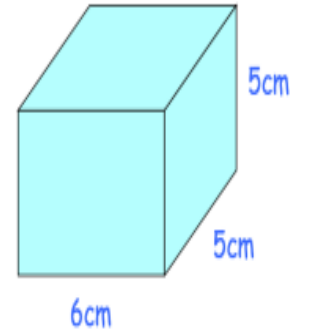
(a)



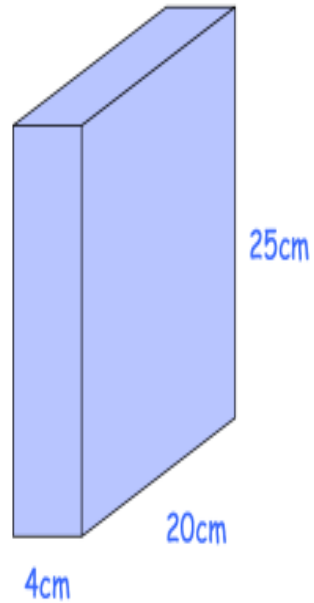
(b)



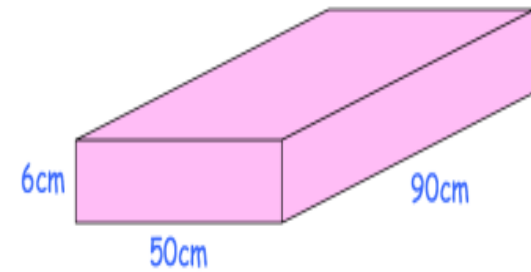
(c)



(d)



(e)



(f)

