






Maths Homework - EYFS

Please draw in your **red homework books**.

Odd Socks Activity for Odds and Evens

Count the socks and then pair them up. Is there an odd sock?

	How many socks are there? <input type="checkbox"/> Is there an odd one out? yes no Is there an odd or even number of socks? odd even
	How many socks are there? <input type="checkbox"/> Is there an odd one out? yes no Is there an odd or even number of socks? odd even
	How many socks are there? <input type="checkbox"/> Is there an odd one out? yes no Is there an odd or even number of socks? odd even
	How many socks are there? <input type="checkbox"/> Is there an odd one out? yes no Is there an odd or even number of socks? odd even
	How many socks are there? <input type="checkbox"/> Is there an odd one out? yes no Is there an odd or even number of socks? odd even

Draw an **odd** number of socks.

Draw an **even** number of socks.