

Year 2 – Homework

Complete the following in your homework book.

1. Circle some of the things you could use to measure how much this bucket can hold?



2. Circle some of the things you could use to measure how much this bucket can hold?



a) Should I choose pile A or pile B to compare?

b) Why is this important?

3. Let's look at some containers.

a) The _____ has the largest capacity.

b) The _____ has the smallest capacity.

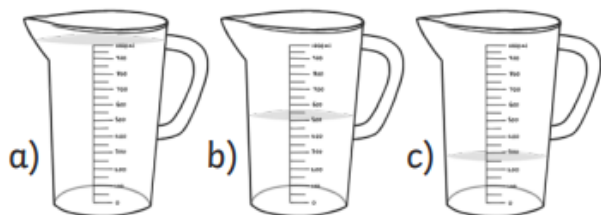
c) The _____ has a bigger capacity than the _____.

d) The _____ has a smaller capacity than the _____.



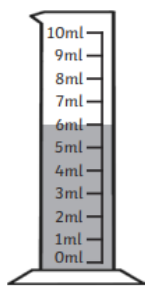
4. How much water is in the jugs?

d) Number the jugs from smallest, 1 to the biggest, 3.

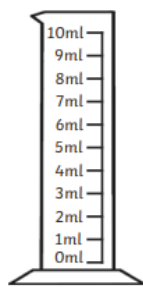


1. _____ 2. _____ 3. _____

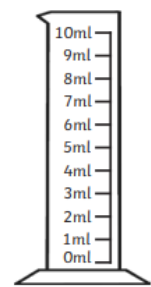
Draw the following beakers in your homework book showing the levels stated underneath.



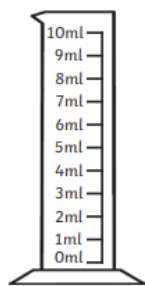
Example: 6ml



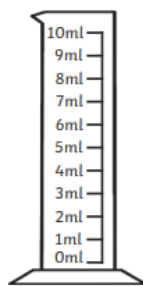
8ml



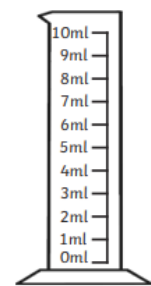
3ml



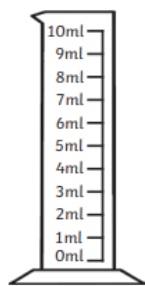
7ml



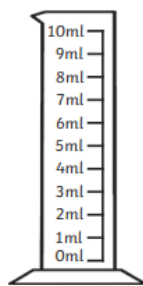
2ml



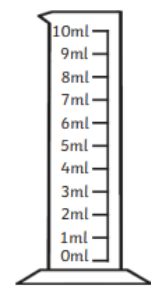
9ml



5ml

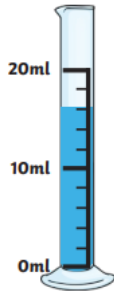


1ml

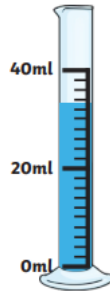


0ml

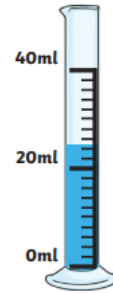
How much water is there in each jug?



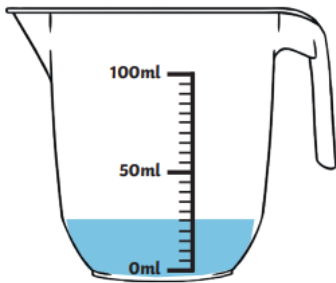
1. _____ ml



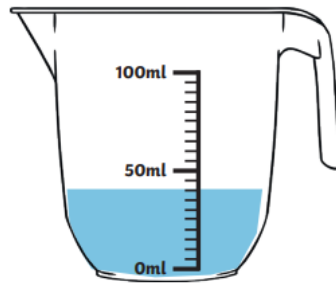
2. _____ ml



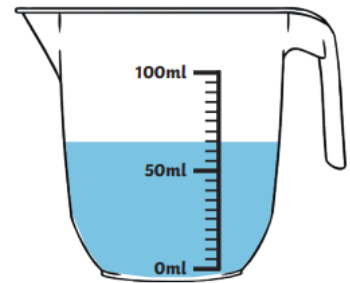
3. _____ ml



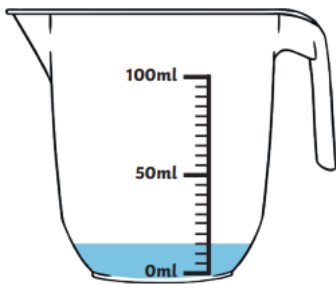
4. _____ ml



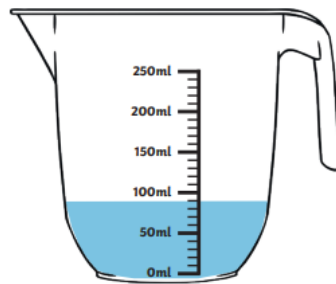
5. _____ ml



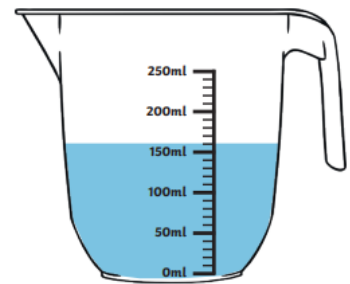
6. _____ ml



7. _____ ml



8. _____ ml



9. _____ ml