

Find the Pattern

Continue these patterns.



1 Here is a bee.



The bee makes a half turn.

Which direction is the bee now facing?

Tick your answer.

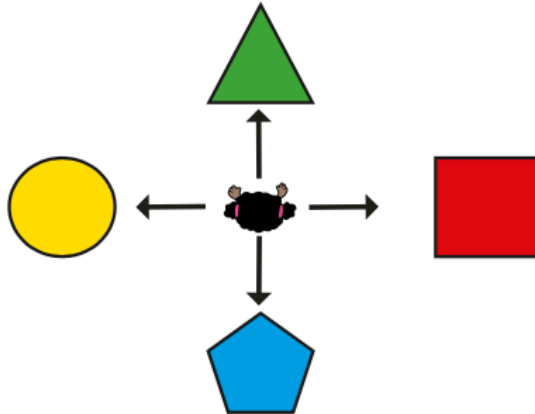


2 Colour the balloons.

- The red balloon is to the left of the green balloon.
- The balloon in the middle is green.
- The other balloon is blue.




- 3** Whitney is facing the triangle.
She makes a half turn.



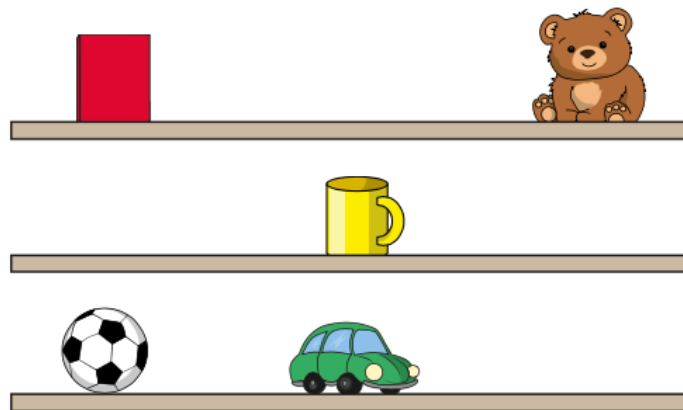
Tick the shape that Whitney is now facing.

- 4** Here are some animals on a grid.



- a)** The bee moves 2 squares forward and 1 square left.
Draw the bee in its new position.
- b)** How can the tortoise move to the ant?
Is there more than one way?

5 Here are some shelves.



a) Tick the object that is on the **top** shelf.

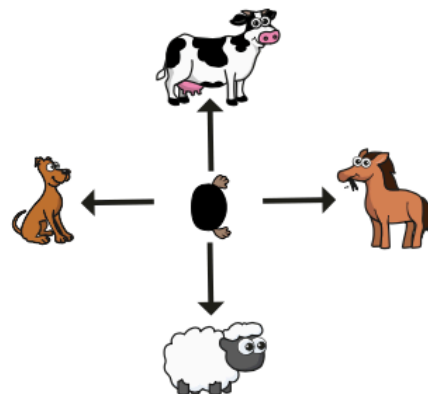


b) Tick the object that is **above** the car.



6 There are four animals in a field.

Mo is facing the horse.



Mo makes a quarter turn.

a) Circle the animals he could be facing now.

b) Explain why there is more than one answer.