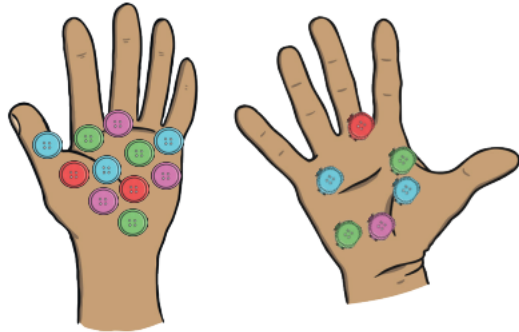


Maths Homework - EYFS

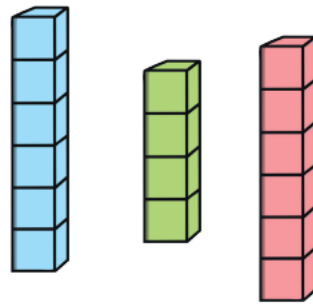
Please draw and write in your **red homework books**.

EYFS Maths Activity Mat: Comparing Numbers to 10

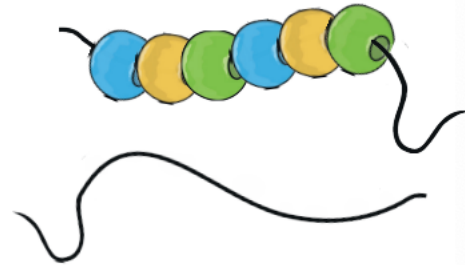
Two friends picked up some buttons. Who picked up the **most** buttons? Put a circle around their hand.



I built 3 towers. Which towers have the same number of bricks? Circle them.



Mahdi made a bracelet with 6 beads. Can you draw a bracelet with **fewer** beads?



3 brothers compared the number of letters in their name. Count the letters in each name.

Chidi

Bai

Frank



Which name has the **fewest** letters in?

0 1 2 3 4 5
6 7 8 9 10

