

09/03/22

Year 5/6 Maths Homework



Measuring Perimeter

I can calculate the perimeter of a shape in centimetres.



• Year 5

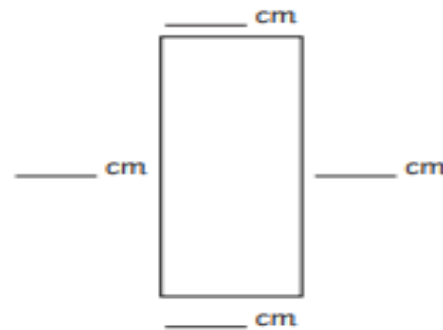
1) Measure and label the sides and calculate the perimeter of these shapes:



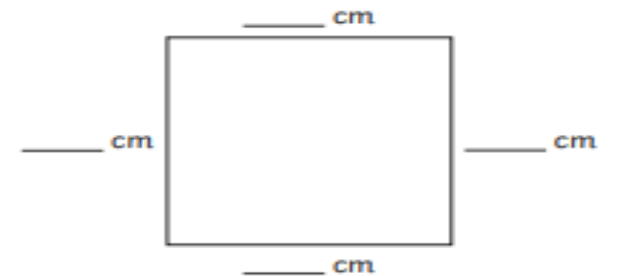
a) perimeter _____ cm



b) perimeter _____ cm



c) perimeter _____ cm



d) perimeter _____ cm



Calculating Area

Find the area of the shapes.

1. 6 inches

3 inches



2. 7 inches

2 inches



3.

9 inches

1 inch



4.

4 inches

4 inches



5.

8 cm

2 cm



6.

7 cm

3 cm



7.

9 cm

7 cm



8.

4 miles

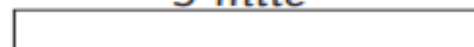
2 miles



9.

5 mile


1 mile



10.

7 yards

4 yards



- Year 6