

KS1 Maths Homework

Year 1- Please draw and write answers in your red homework book.

Order Groups of Objects


4. Draw a group of sweets in the empty box to make the order correct.

The groups are ordered from smallest to greatest.



VF
HW/Ext




5. True or false? Each number card below could fit in the empty box.



greatest



smallest



VF
HW/Ext

6. Use the picture cards to order two different sequences.



smallest



greatest



RPS
HW/Ext

Year 2 - Please draw and write answers in your red homework book.

Make Arrays

7. Match the picture to the correct number sentence.



$$5 + 5 + 5 + 5 + 5 = 25$$



$$3 + 3 + 3 + 3 + 3 + 3 + 3 + 3 + 3 + 3 = 30$$



$$2 + 2 + 2 + 2 + 2 + 2 + 2 = 14$$



VF
HW/Ext

8. Complete the number sentences to match the statements.

There are 5 rows.
There are 6 columns.



$$\square + \square + \square + \square + \square + \square = \square$$

There are 10 rows.
There are 4 columns.



$$\square + \square + \square + \square = \square$$

There are 3 rows.
There are 5 columns.



$$\square + \square + \square + \square + \square = \square$$



VF
HW/Ext

9. Make 2 different arrays using these marbles.



RPS
HW/Ext

