
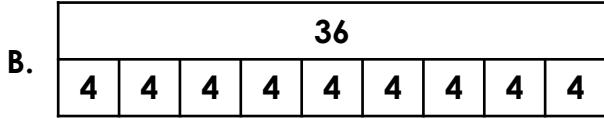


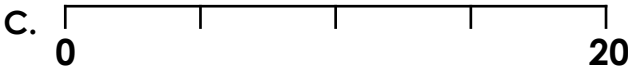
4. Match the representations to the calculations and complete the calculations.



D. $36 \div 4 =$



E. $20 \div 4 =$

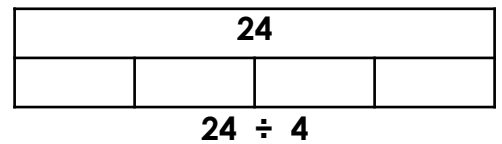
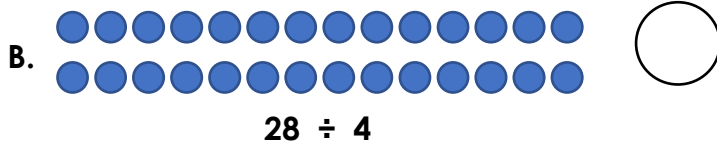
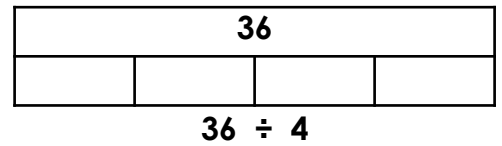
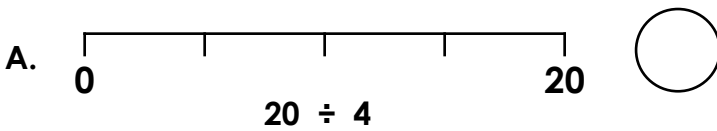


F. $24 \div 4 =$



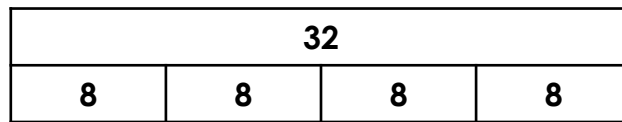
VF
HW/Ext

5. Complete the statements using $>$ $<$ or $=$.



VF
HW/Ext

6. Helena and Jamie are discussing a calculation.



This bar model shows that sharing 32 into 4 groups is equal to 8.



Helena



Jamie

This bar model shows that dividing 32 by 8 is equal to 8.

Who is correct? Explain your answer.



RPS
HW/Ext