


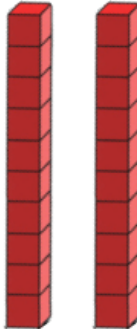
KS1 Maths Homework

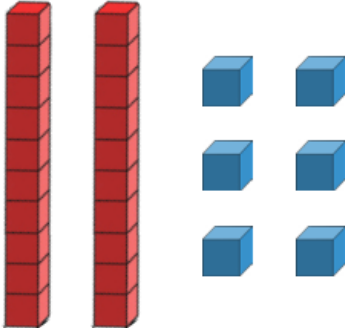
Year 1- Please draw and write answers in your red homework book.

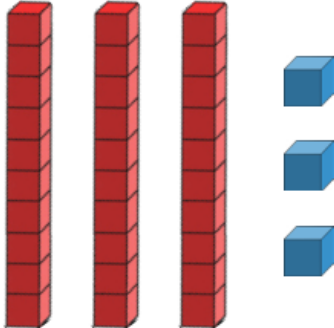
Tens and Ones

1. Select the number that is represented by the base ten equipment.

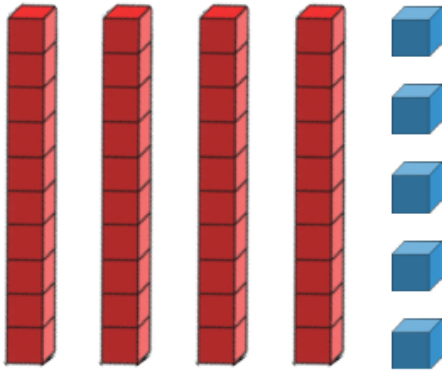
		
2	6	9
<input type="checkbox"/>	<input type="checkbox"/>	<input type="checkbox"/>

		
14	18	20
<input type="checkbox"/>	<input type="checkbox"/>	<input type="checkbox"/>

		
21	26	29
<input type="checkbox"/>	<input type="checkbox"/>	<input type="checkbox"/>

		
32	33	37
<input type="checkbox"/>	<input type="checkbox"/>	<input type="checkbox"/>

2. Finish the sentence by typing the correct numbers in the boxes.

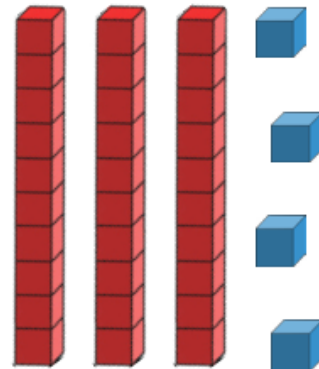


There are tens and ones. The number is .

3. Is Ben correct? Can you explain why? Type your answer in the box.



This shows the number 23.



Year 2 - Please draw and write answers in your red homework book.

Combine Coins and Notes

To combine coins to make a particular value.

Draw which 3 coins you would use to make these amounts.

50p

56p

80p

£1 and 7p

Which does not show £5 and 60p? Tick it then explain why.