

11/11/21

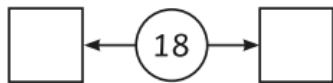
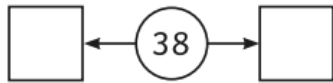
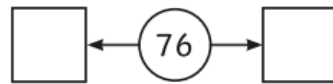
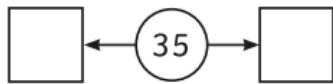
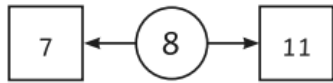
Year 5/6 Maths Homework

Year 5

• Prime Numbers

Can you find the nearest prime number before and after each number below?

The first one is done for you.



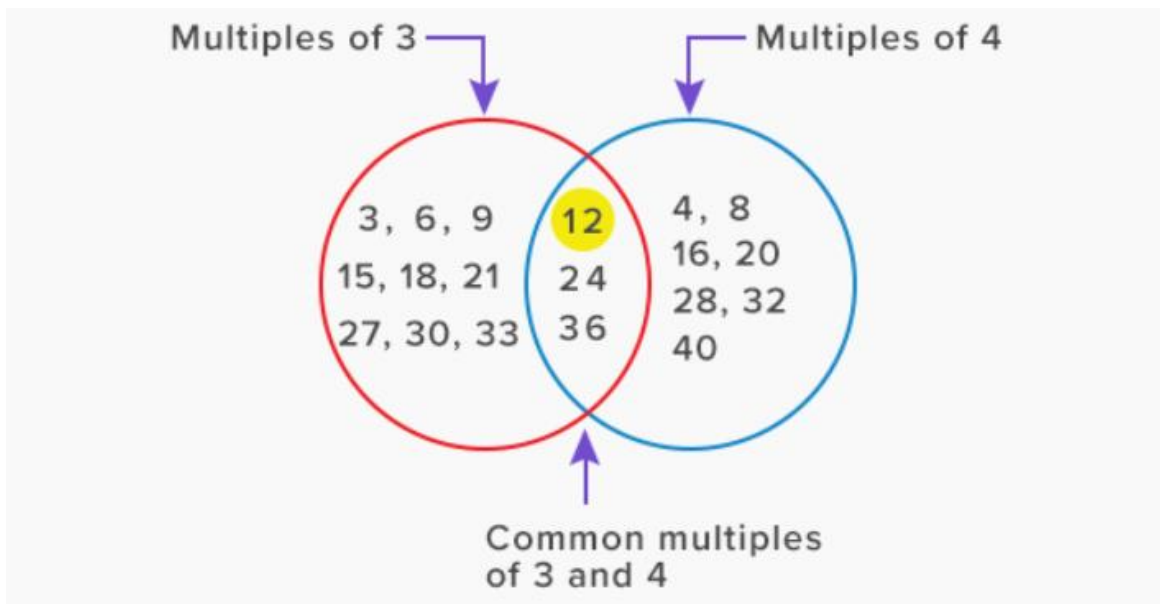
Prime Numbers Challenge

Shade all the prime numbers to 100.

1	2	3	4	5	6	7	8	9	10
11	12	13	14	15	16	17	18	19	20
21	22	23	24	25	26	27	28	29	30
31	32	33	34	35	36	37	38	39	40
41	42	43	44	45	46	47	48	49	50
51	52	53	54	55	56	57	58	59	60
61	62	63	64	65	66	67	68	69	70
71	72	73	74	75	76	77	78	79	80
81	82	83	84	85	86	87	88	89	90
91	92	93	94	95	96	97	98	99	100

Year 6

- **Common multiple**
- A common multiple is a whole number that is a shared multiple of each set of numbers. The multiples that are common



Find a common factor of the following pairs of numbers:

Example

16 and 20

4

Q1

15 and 25

Q2

60 and 80

Q3

26 and 48

Q4

40 and 68

Q5

60 and 90

Q6

120 and 140

Q7

32 and 78

Q8

20 and 88