


**Draw the number lines in your homework book and mark the numbers on each line.**


## **0–10 000 Number Line**

Mark the following numbers on each number line below.


1. 9 000  
2 000  
5 000



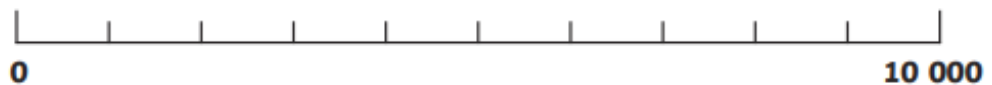
2. 5 000  
2 500  
7 500



3. 8 000  
3 000  
6 000




4. 4 000  
7 000  
5 000



5. 3 500  
7 500  
500



6. 2 500  
9 000  
4 000



7. Estimate the value of the points marked on the number line below:

