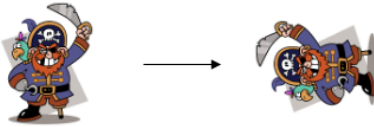



# KS1 Math's homework: Please draw and write in your homework books

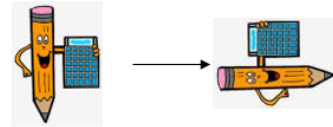


I can recognise a clockwise or anticlockwise turn.

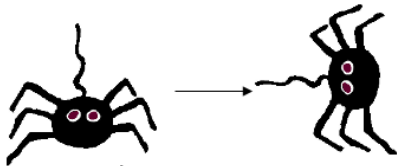
How have these objects turned? Clockwise or anti-clockwise?  
Circle the right answer.



clockwise ↻ or anti-clockwise ↺



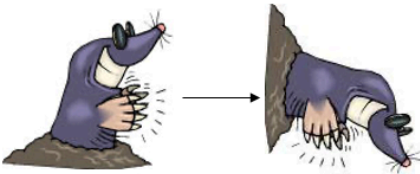
clockwise ↻ or anti-clockwise ↺



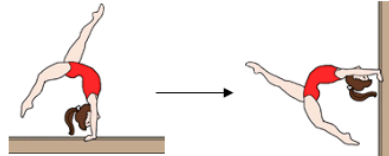
clockwise ↻ or anti-clockwise ↺



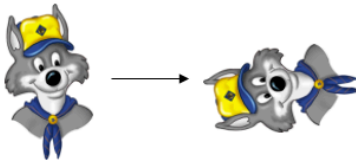
clockwise ↻ or anti-clockwise ↺



clockwise ↻ or anti-clockwise ↺



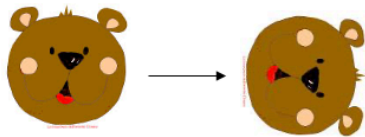
clockwise ↻ or anti-clockwise ↺



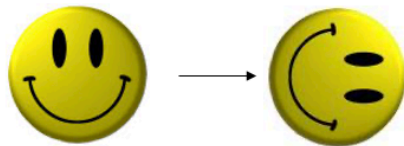
clockwise ↻ or anti-clockwise ↺



clockwise ↻ or anti-clockwise ↺

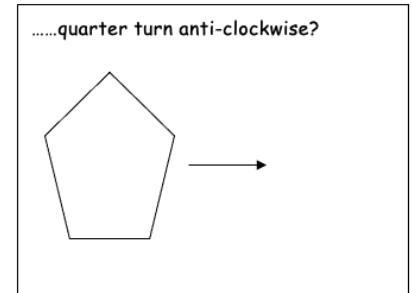
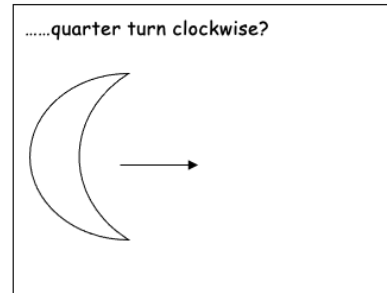
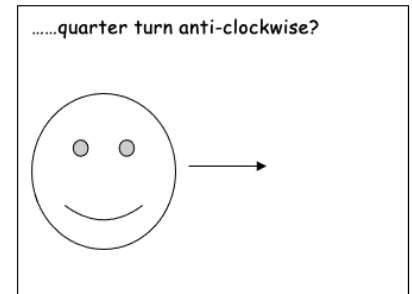
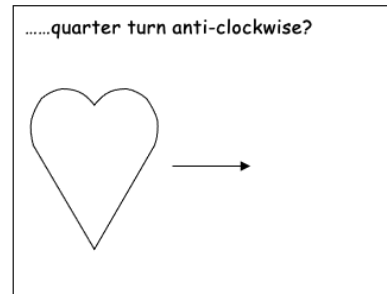
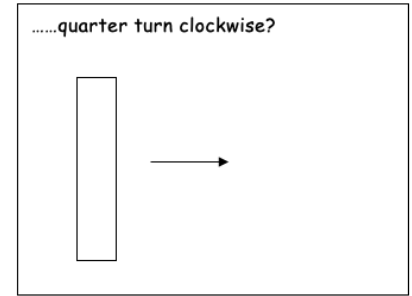
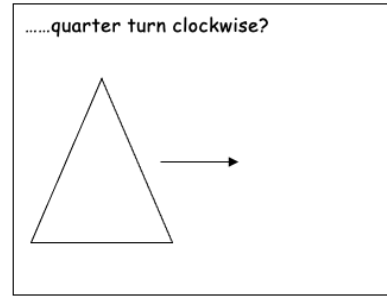


clockwise ↻ or anti-clockwise ↺



clockwise ↻ or anti-clockwise ↺

Extension - Which way will these shapes face after they have turned.....



Make a similar question for Mr H!