





KS1 Math's homework: please write in your homework books-


Make Arrays 




There are ____ dots in each row.
 There are ____ rows.
 ____ + ____ = ____
 There are ____ dots altogether.


There are ____ dots in each column.
 There are ____ columns.
 ____ + ____ + ____ + ____ = ____
 There are ____ dots altogether.

Make Arrays 



Which calculation matches the array?



$2 + 2 + 2 + 2 + 2 = 10$
 $5 + 5 = 10$





Here are 2 more arrays with 10 dots. Are they right?


4 rows of dots.
 10 dots in each row.

How many dots altogether?





Make Arrays 

Find 15 cubes. Can you make equal rows?



There are 3 ways to make an array with 20 counters.
 Do you agree?

Can you make an array with 13 sticks?
 It must have more than 1 row.