



1. which is longer?



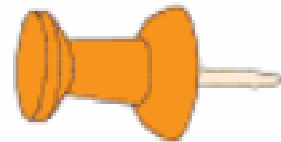
2. which is shorter?



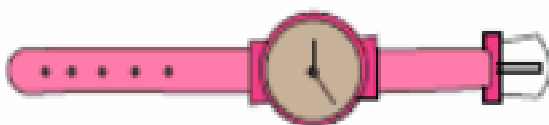
3. which is shorter?



4. which is longer?



5. which is longer?



6. which is shorter?

