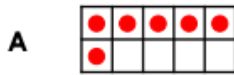


KS1 Maths homework:

Year 1: write answers in your red homework book.

Fact Families – 8 Facts

4. Match each tens frame with a related fact from the same family. Write another related fact in the space provided.



$9 - 4 = 5$



$3 + 5 = 8$



$0 + 6 = 6$



$6 = 10 - 4$



VF
HW/Ext

5. Complete the sentence to represent the calculation. Complete the related facts.

$8 = 5 + 3$

There were children playing.

were girls and were boys.

- = 3

8 - =

+ = 8

+ =

8 = +

= -

= - 3



VF
HW/Ext

6. Tick the calculations below that are not related to the tens frame.



$7 + 3 = 10$

$10 = 7 - 3$

$10 - 7 = 3$

$3 + 7 = 10$

$3 = 10 - 7$

$10 - 3 = 7$

$10 = 7 + 3$

$7 - 3 = 10$

$10 = 3 + 7$

$7 = 10 - 3$

Explain how you know.




RPS
HW/Ext

Year 2: write answers in your red homework book.

Measure Length 2

7. Match each gardening tool to the correct measurement.



6cm

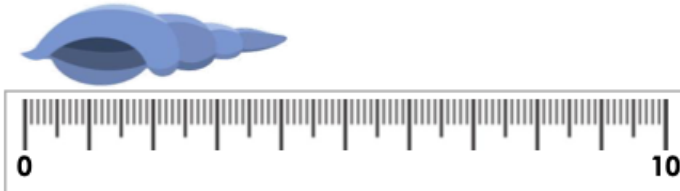


8cm



VF
HW/Ext

8. Use the measurements to complete the sentences below.



A. The shell measures ___ cm.






B. The twig measures ___ cm.

C. The _____ is longer than the _____.



VF
HW/Ext

9. Measure each cactus below and order them by height.



RPS
HW/Ext

