

Year 1 Maths Homework

- You do not print the homework, write the answers/ number sentences directly in your **red homework books**.

Number Shape Multiplication 2x Tables

I can write multiplication statements using the multiplication and equals signs.

For each image, write the multiplication fact shown.

For example:



$$3 \times 2 = 6$$



$$\square \times \square = \square$$



$$\square \times \square = \square$$



$$\square \times \square = \square$$



$$\square \times \square = \square$$



$$\square \times \square = \square$$

Challenge:

Jayne says, "5 × 2 is the same as 2 × 5."

Is she correct?

















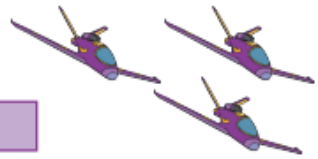
Use your number shapes to show how you know.

Count the superhero-themed objects in the box. Now write a number sentence with the correct symbol in the middle to show which is greater. First one has been done for you.



write for you.



 <input type="text" value="3"/>		 <input type="text" value="5"/>
 <input type="text"/>		 <input type="text"/>
 <input type="text"/>		 <input type="text"/>
 <input type="text"/>		 <input type="text"/>
 <input type="text"/>		 <input type="text"/>
 <input type="text"/>		 <input type="text"/>
 <input type="text"/>		 <input type="text"/>
 <input type="text"/>		 <input type="text"/>